

Name : _____

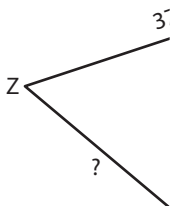
Perimeter of a Polygon

A) Find the side length of each regular polygon.

S.No	Perimeter	Number of sides	Side length
1.	48 in	8	
2.	33 ft	3	
3.	15 yd	5	
4.	60 ft	6	

B) Find the side length

5)



Perimeter = 92 y

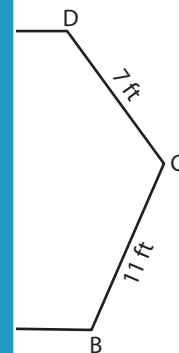
PREVIEW

Gain complete access to the largest collection of worksheets in all subjects!

Members, please log in to download this worksheet.

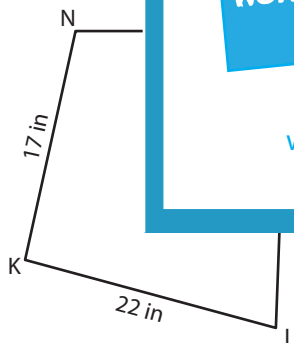
Not a member? Please sign up to gain complete access.

www.mathworksheets4kids.com

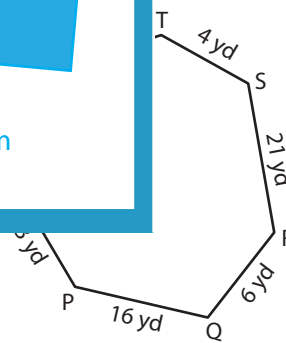


; DE = _____

7)



Perimeter = 79 in ; LM = _____



Perimeter = 80 yd ; UV = _____

9) A quadrilateral has a perimeter of 85 inches. If the three sides of the quadrilateral measure 25 inches, 39 inches and 14 inches, what is the length of the other side?

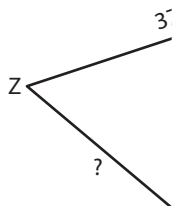
Perimeter of a Polygon

A) Find the side length of each regular polygon.

S.No	Perimeter	Number of sides	Side length
1.	48 in	8	6 in
2.	33 ft	3	11 ft
3.	15 yd	5	3 yd
4.	60 ft	6	10 ft

B) Find the side length

5)



Perimeter = 92 y

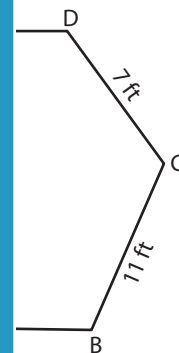
PREVIEW

Gain complete access to the largest collection of worksheets in all subjects!

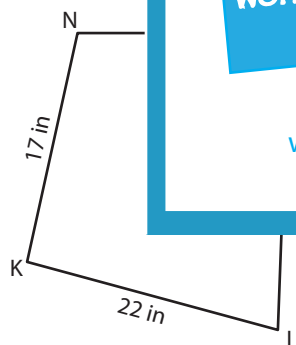
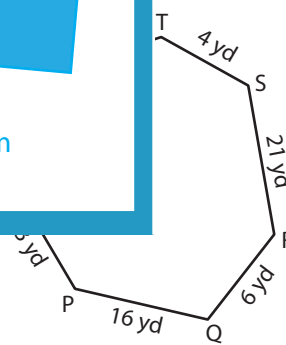
Members, please log in to download this worksheet.

Not a member? Please sign up to gain complete access.

www.mathworksheets4kids.com

; DE = **5 ft**

7)

Perimeter = 79 in ; LM = **27 in**Perimeter = 80 yd ; UV = **11 yd**

9) A quadrilateral has a perimeter of 85 inches. If the three sides of the quadrilateral measure 25 inches, 39 inches and 14 inches, what is the length of the other side?

7 inches