

Name : _____

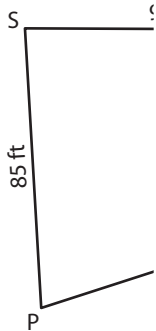
Perimeter of a Polygon

A) Find the side length of each regular polygon.

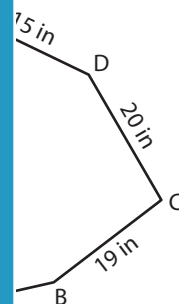
S.No	Perimeter	Number of sides	Side length
1.	140 ft	4	
2.	258 yd	6	
3.	108 in	3	
4.	231 yd	7	

B) Find the side length of each polygon.

5)

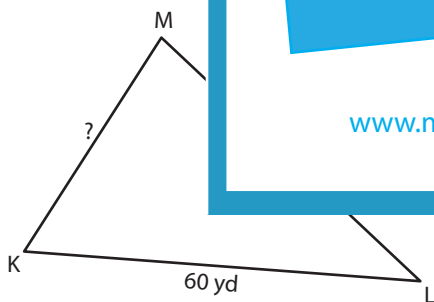


Perimeter = 312

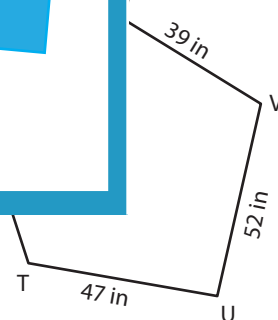


AB = _____

7)



Perimeter = 162 yd ; KM = _____



Perimeter = 220 in ; WX = _____

9) Find the side length of the regular octagon whose perimeter is 120 feet.

PREVIEW

Gain complete access to the largest collection of worksheets in all subjects!

Members, please log in to download this worksheet.

Not a member? Please sign up to gain complete access.

www.mathworksheets4kids.com

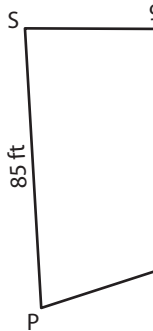
Perimeter of a Polygon

A) Find the side length of each regular polygon.

S.No	Perimeter	Number of sides	Side length
1.	140 ft	4	35 ft
2.	258 yd	6	43 yd
3.	108 in	3	36 in
4.	231 yd	7	33 yd

B) Find the side length of the

5)



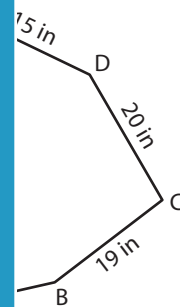
Perimeter = 312

PREVIEW

Gain complete access to the largest collection of worksheets in all subjects!

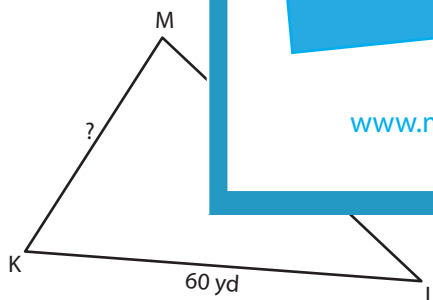
Members, please log in to download this worksheet.

Not a member? Please sign up to gain complete access.

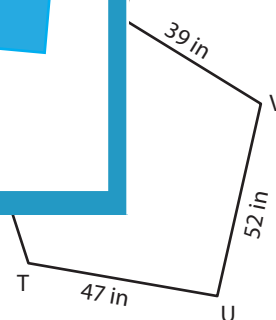
www.mathworksheets4kids.com

AB = 18 in

7)



Perimeter = 162 yd ; KM = 45 yd



Perimeter = 220 in ; WX = 39 in

9) Find the side length of the regular octagon whose perimeter is 120 feet.

15 feet