





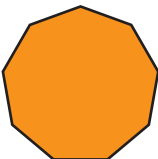



Name : _____

REGULAR POLYGONS - ANGLES

Regular Polygons	Number of angles	Sum of the measures of the interior angles	Measure of each interior angle	Measure of each exterior angle
 Equilateral Triangle	3	180°	60°	120°
 Square	4	360°	90°	90°
 Pentagon	5	540°	108°	72°
 Hexagon	6	720°	120°	60°
 Heptagon	7	900°	128.6°	51.4°
 Octagon	8	1080°	135°	45°
 Nonagon	9	1260°	140°	40°
 Decagon	10	1440°	144°	36°

PREVIEW

Gain complete access to the largest collection of worksheets in all subjects!

Members, please log in to download this worksheet.

Not a member? Please sign up to gain complete access.

www.mathworksheets4kids.com