

# Facing Left & Facing Right

Observe each picture, and identify whether the animal is facing left or right. Check the appropriate option.


1)



left

right

2)



left

right

3)



left


# PREVIEW

Gain complete access to the largest collection of worksheets in all subjects!

Members, please log in to download this worksheet.


Not a member? Please sign up to gain complete access.

[www.mathworksheets4kids.com](http://www.mathworksheets4kids.com)




right

5)



left



right

7)



left

right

8)



left

right

Name : \_\_\_\_\_

# Facing Left & Facing Right

Observe each picture, and identify whether the animal is facing left or right. Check the appropriate option.


1)



left

right


2)



left

right

3)



left


# PREVIEW

Gain complete access to the largest collection of worksheets in all subjects!

Members, please log in to download this worksheet.


Not a member? Please sign up to gain complete access.

[www.mathworksheets4kids.com](http://www.mathworksheets4kids.com)




right

5)



left



right

7)



left

right

8)



left

right