

Facing Left & Facing Right

Observe each picture, and identify whether the animal is facing left or right. Check the appropriate option.


1)



left

right

2)



left

right

3)



left




right

5)



left



right

PREVIEW


Gain complete access to the largest collection of worksheets in all subjects!

Members, please log in to download this worksheet.

Not a member? Please sign up to gain complete access.

www.mathworksheets4kids.com


7)



left

right

8)



left

right

Name : _____

Facing Left & Facing Right

Observe each picture, and identify whether the animal is facing left or right. Check the appropriate option.


1)



left

right

2)



left

right

3)



left




right

5)



left



right

PREVIEW


Gain complete access to the largest collection of worksheets in all subjects!

Members, please log in to download this worksheet.

Not a member? Please sign up to gain complete access.

www.mathworksheets4kids.com


7)



left

right

8)



left

right