


Name : _____

Left, Right, and Middle

Sheet 1

1) Which 3D shape is on the right?




cube

cylinder

cone

2) Which 3D shape is



sphere

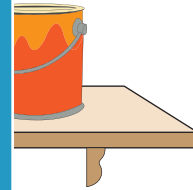
PREVIEW

Gain complete access to the largest collection of worksheets in all subjects!

Members, please log in to download this worksheet.

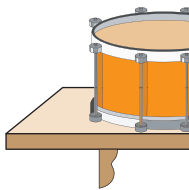
Not a member? Please sign up to gain complete access.

www.mathworksheets4kids.com

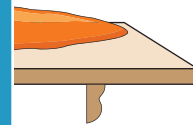


cylinder

3) Which 3D shape is

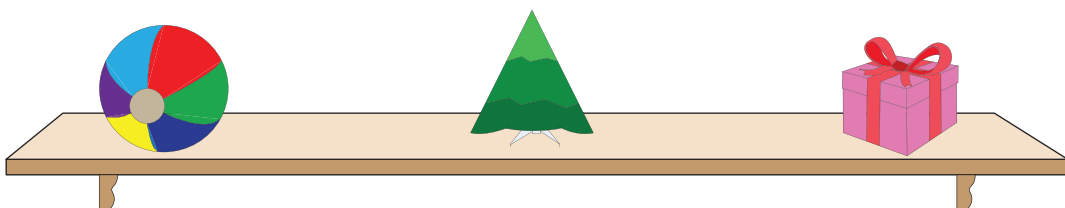


cube



cone

4) Which 3D shape is on the right?



cone


cube

sphere

Name : _____

Left, Right, and Middle

1) Which 3D shape is on the right?




cube

cylinder

cone

2) Which 3D shape is



sphere

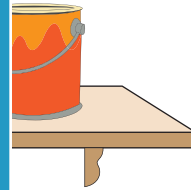
PREVIEW

Gain complete access to the largest collection of worksheets in all subjects!

Members, please log in to download this worksheet.

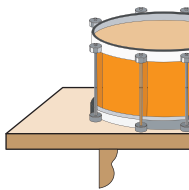
Not a member? Please sign up to gain complete access.

www.mathworksheets4kids.com

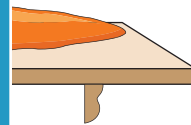


cylinder

3) Which 3D shape is

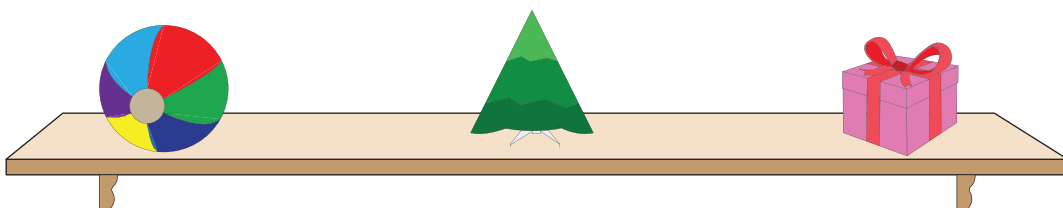


cube



cone

4) Which 3D shape is on the right?



cone

cube

sphere.