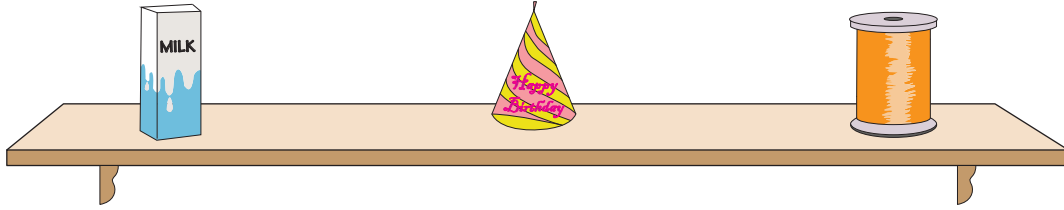


Left, Right, and Middle

1) Which 3D shape is on the left?




cone

prism

cylinder

2) Which 3D shape is



cube

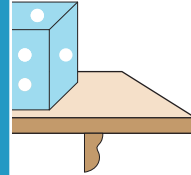
PREVIEW

Gain complete access to the largest collection of worksheets in all subjects!

Members, please log in to download this worksheet.

Not a member? Please sign up to gain complete access.

www.mathworksheets4kids.com

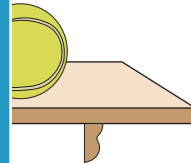


cylinder

3) Which 3D shape is

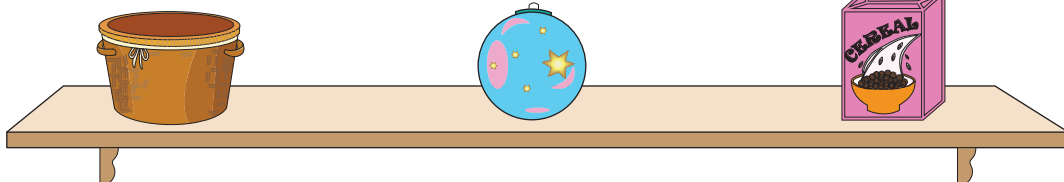


sphere



prism

4) Which 3D shape is on the left?



cylinder

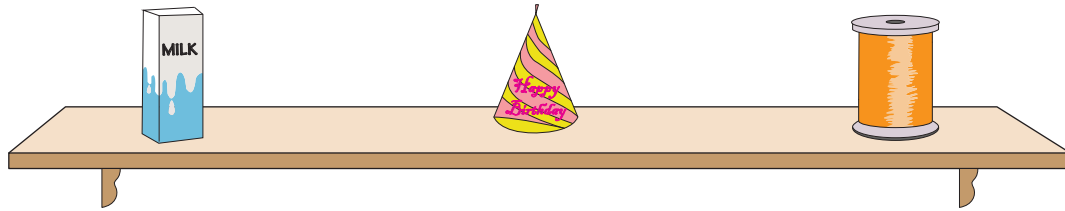
prism

sphere

Name : _____

Left, Right, and Middle

1) Which 3D shape is on the left?




cone

prism

cylinder

2) Which 3D shape is



cube

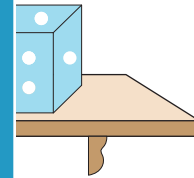
PREVIEW

Gain complete access to the largest collection of worksheets in all subjects!

Members, please log in to download this worksheet.

Not a member? Please sign up to gain complete access.

www.mathworksheets4kids.com

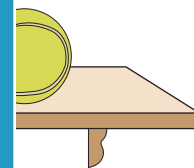


cylinder

3) Which 3D shape is

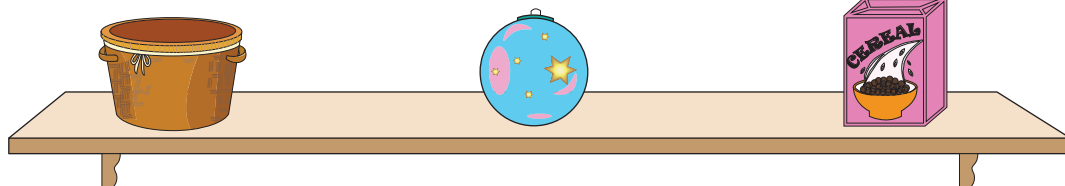


sphere



prism

4) Which 3D shape is on the left?



cylinder

prism

sphere.