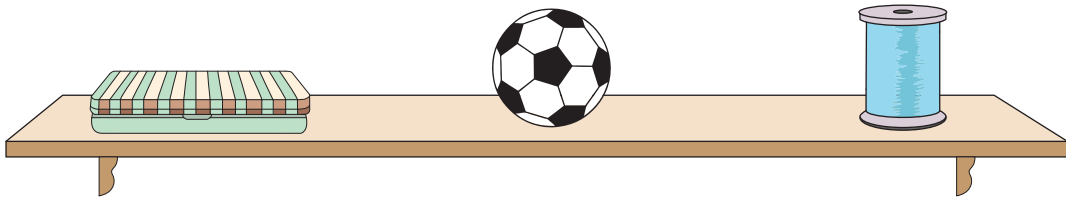


Name : _____

Left, Right, and Middle

Sheet 3

1) Which 3D shape is in the middle?

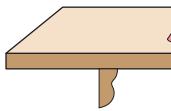


sphere

cylinder

cone

2) Which 3D shape is



cube

PREVIEW

Gain complete access to the largest collection of worksheets in all subjects!

Members, please log in to download this worksheet.

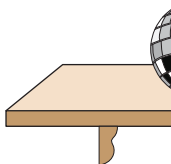
Not a member? Please sign up to gain complete access.

www.mathworksheets4kids.com



cylinder

3) Which 3D shape is



cylinder

Members, please log in to download this worksheet.

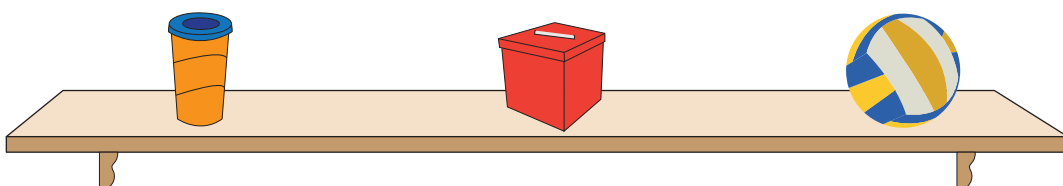
Not a member? Please sign up to gain complete access.

www.mathworksheets4kids.com



cone

4) Which 3D shape is in the middle?



cube

cylinder

sphere