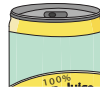
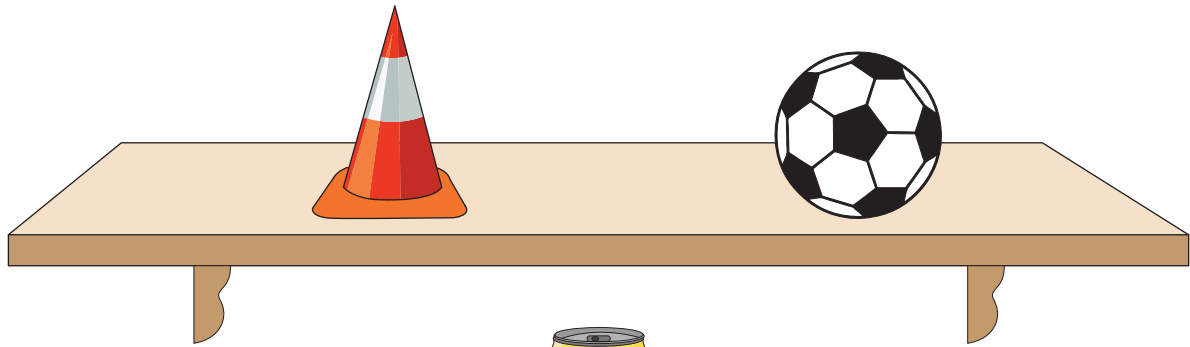


Name : _____

Identify Top and Bottom

Observe the position of each real-life 3D object, and check the appropriate answer.



PREVIEW

Gain complete access to the largest collection of worksheets in all subjects!

Members, please log in to download this worksheet.

Not a member? Please sign up to gain complete access.

www.mathworksheets4kids.com

1) Where is the sphere

middle

bottom

2) Where is the cube

middle

bottom

3) Where is the cone-shaped object?

top

middle

bottom

4) Where is the cylinder-shaped object?

top

middle

bottom

5) Where is the pyramid-shaped object?

top

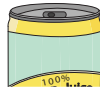
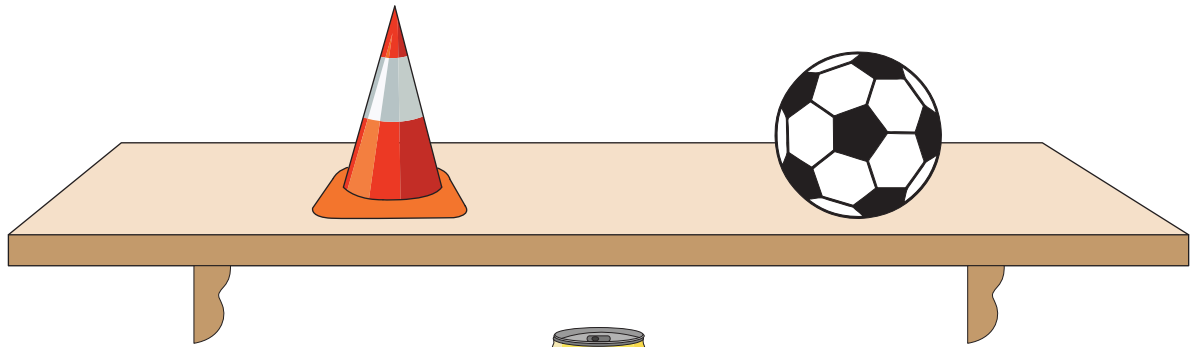
middle

bottom

Name : _____

Identify Top and Bottom

Observe the position of each real-life 3D object, and check the appropriate answer.



PREVIEW

Gain complete access to the largest collection of worksheets in all subjects!

Members, please log in to download this worksheet.

Not a member? Please sign up to gain complete access.

www.mathworksheets4kids.com

- 1) Where is the sphere? top middle bottom
- 2) Where is the cube? top middle bottom
- 3) Where is the cone-shaped object? top middle bottom
- 4) Where is the cylinder-shaped object? top middle bottom
- 5) Where is the pyramid-shaped object? top middle bottom