

Commutative Property of Addition

Write the addition equation represented by each model.

1)

_____ + _____ = _____ + _____

2)

_____ + _____ = _____ + _____

3)

_____ + _____ = _____ + _____

4)

_____ + _____ = _____ + _____

PREVIEW

Gain complete access to the largest collection of worksheets in all subjects!

Members, please log in to download this worksheet.





Not a member? Please sign up to gain complete access.

www.mathworksheets4kids.com

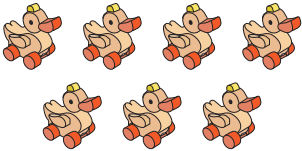
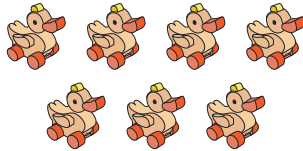
Name : _____

Commutative Property of Addition



Write the addition equation represented by each model.

1)  +  =  + 


4
+
9
=
9
+
4

2)  + 

7
+
7

3)  + 

2
+
2

4)  +  =  + 

3
+
1
=
1
+
3

PREVIEW

Gain complete access to the largest collection of worksheets in all subjects!

Members, please log in to download this worksheet.

Not a member? Please sign up to gain complete access.

www.mathworksheets4kids.com