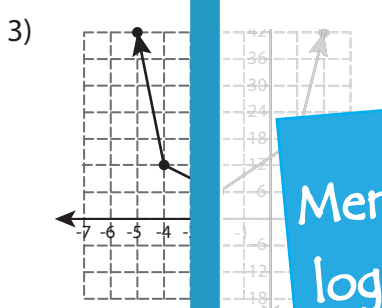
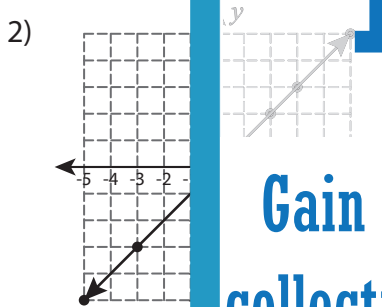
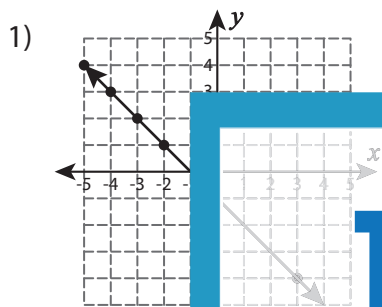


A) Check whether the coordinates of the points on the graph represents a proportional relationship. Justify your answer.



PREVIEW

Gain complete access to the largest collection of worksheets in all subjects!

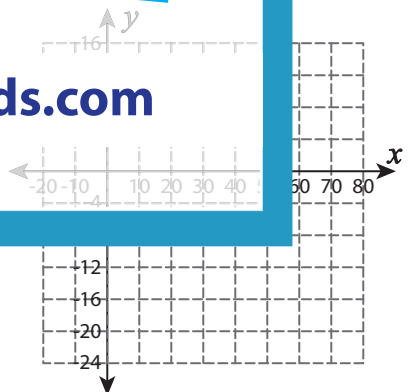
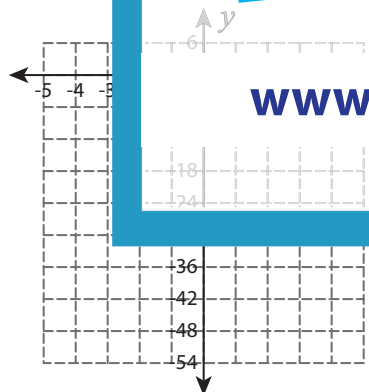
Members, please log in to download this worksheet.

Not a member? Please sign up to gain complete access.

B) Use the graph to find the value of x in a proportion.

1)

x	-1	0	10	30	40
y	-18	-24	-4	-12	-16



www.mathworksheets4kids.com