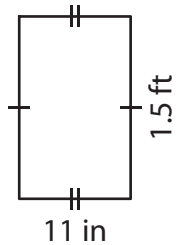


Name : _____

Area of a Quadrilateral

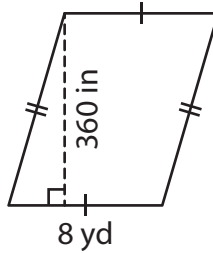
Find the area of each shape. Round your answer to two decimal places.

1)



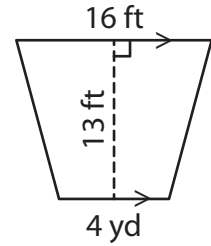
Area = _____

2)

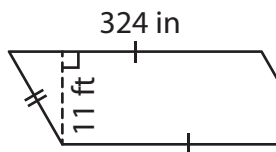


Area = _____ ft^2

3)



4)



Area = _____

PREVIEW

Gain complete access to the largest collection of worksheets in all subjects!

Members, please log in to download this worksheet.

Not a member? Please sign up to gain complete access.

www.mathworksheets4kids.com

Area = _____ yd^2

7) The height of a trapezoid is 34 inches and 8 yards, what is the area of the trapezoid?

Area = _____ yd^2

8) The length and width of a rectangle are 23 feet and 4 yards respectively. Determine the area of the rectangle in square feet.

Name : _____

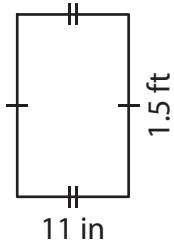
Answer key

Sheet 1

Area of a Quadrilateral

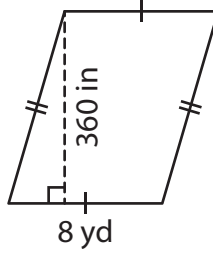
Find the area of each shape. Round your answer to two decimal places.

1)



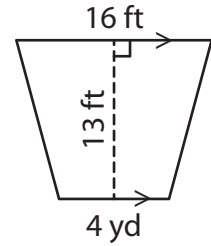
Area = 198

2)

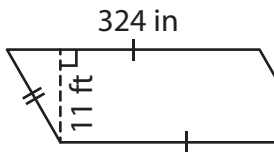


Area = 182 ft²

3)



4)



Area = 297

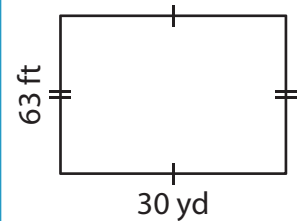
PREVIEW

Gain complete access to the largest collection of worksheets in all subjects!

Members, please log in to download this worksheet.

Not a member? Please sign up to gain complete access.

www.mathworksheets4kids.com



Area = 630 yd²

7) The height of a trapezoid is 34 inches and 8 yards, what is the area of the trapezoid?

81 square yards

8) The length and width of a rectangle are 23 feet and 4 yards respectively. Determine the area of the rectangle in square feet.

276 square feet