

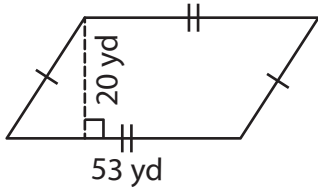
Name : _____

Area – Quadrilateral

L1S2

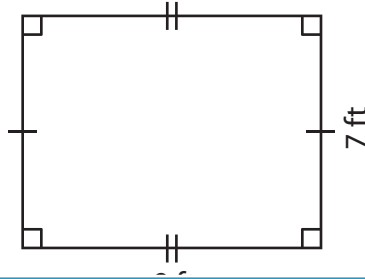
Find the area of each quadrilateral.

1)



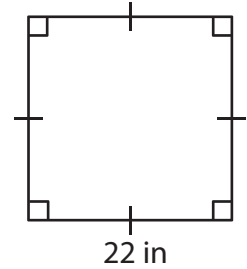
Area = _____

2)

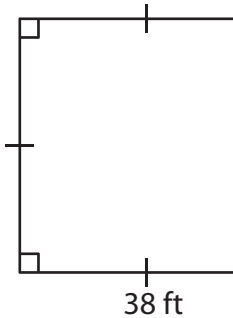


Area = _____

3)



4)



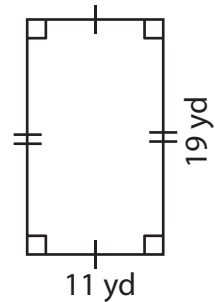
Area = _____

Gain complete access to the largest collection of worksheets in all subjects!

Members, please log in to download this worksheet.

Not a member? Please sign up to gain complete access.

www.mathworksheets4kids.com



Area = _____

7) The side of a square m

8) What is the area of the rectangle whose length is 27 yards and width is 10 yards?

Name : _____

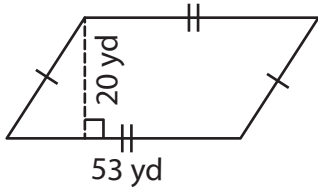
Answer key

Area – Quadrilateral

L152

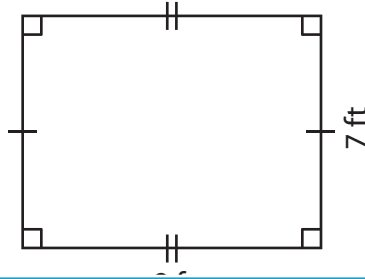
Find the area of each quadrilateral.

1)



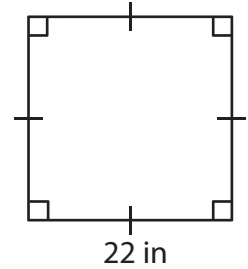
Area = 1,060 yd²

2)

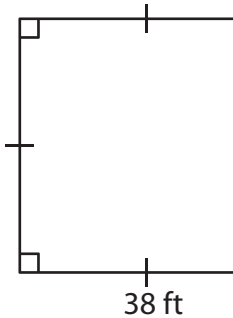


Area = 484 in²

3)



4)



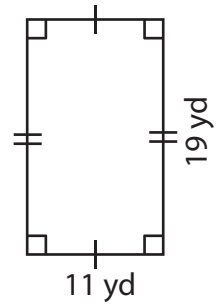
Area = 1,444 ft²

Gain complete access to the largest collection of worksheets in all subjects!

Members, please log in to download this worksheet.

Not a member? Please sign up to gain complete access.

www.mathworksheets4kids.com



Area = 209 yd²

7) The side of a square m

1,600 square feet

8) What is the area of the rectangle whose length is 27 yards and width is 10 yards?

270 square yards