

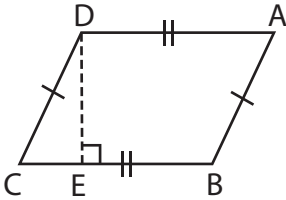
Name : \_\_\_\_\_

## Area – Quadrilateral

L3T2S3

Find the area of each quadrilateral.

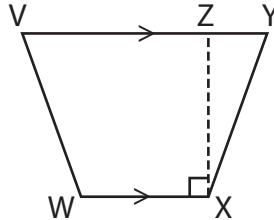
1)



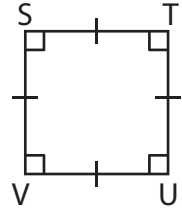
DA = 22 ft ; DE = 15 ft

Area =

2)



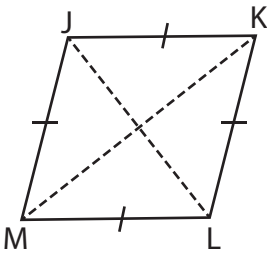
3)



SV = 13 yd

Area =

4)



JL = 10 yd ; KM = 14 yd

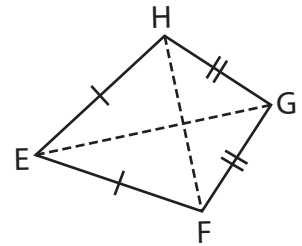
Area =

**PREVIEW**  
Gain complete access to the largest collection of worksheets in all subjects!

Members, please log in to download this worksheet.

Not a member? Please sign up to gain complete access.

[www.mathworksheets4kids.com](http://www.mathworksheets4kids.com)



EG = 22 in ; FH = 19 in

Area =

7) The length and width of a rectangle are 12 cm and 8 cm respectively. Determine the area of the rectangle.

ly. Determine the area of the square.

8) The side of a square measures 8 feet. What is the area of the square?

Name : \_\_\_\_\_

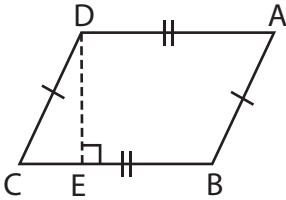
## Answer key

### Area – Quadrilateral

L3T2S3

Find the area of each quadrilateral.

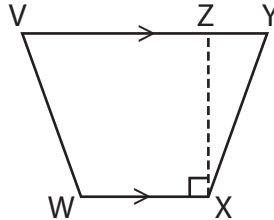
1)



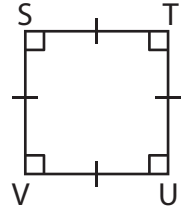
DA = 22 ft ; DE = 15 ft

Area = **330 ft<sup>2</sup>**

2)



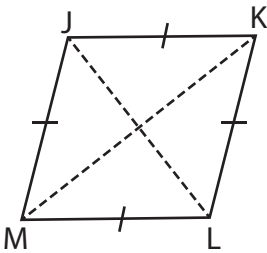
3)



SV = 13 yd

Area = **169 yd<sup>2</sup>**

4)



JL = 10 yd ; KM = 14 yd

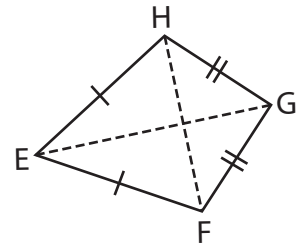
Area = **70 yd<sup>2</sup>**

Gain complete access to the largest collection of worksheets in all subjects!

Members, please log in to download this worksheet.

Not a member? Please sign up to gain complete access.

[www.mathworksheets4kids.com](http://www.mathworksheets4kids.com)



EG = 22 in ; FH = 19 in

Area = **209 in<sup>2</sup>**

7) The length and width of a rectangle.

**221 square inches**

ly. Determine the area of the

8) The side of a square measures 8 feet. What is the area of the square?

**64 square feet**