

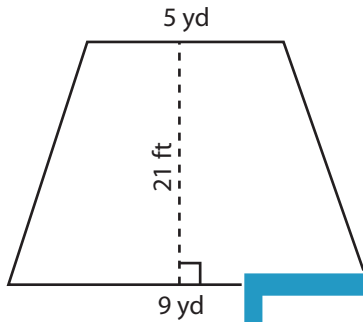
Name : \_\_\_\_\_

## Area of Trapezoid

CS1

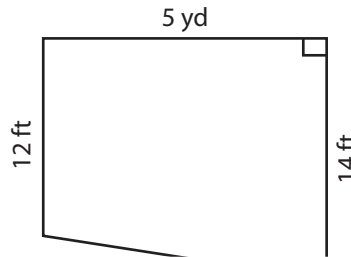
Find the area of each trapezoid.

1)

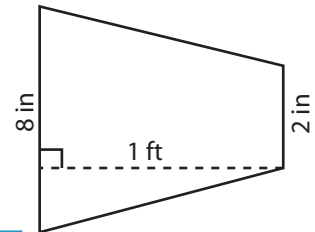


Area = \_\_\_\_\_

2)

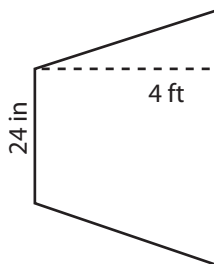


3)



Area = \_\_\_\_\_ in<sup>2</sup>

4)



Area = \_\_\_\_\_

Access the largest collection of worksheets for just **\$19.95** per year!

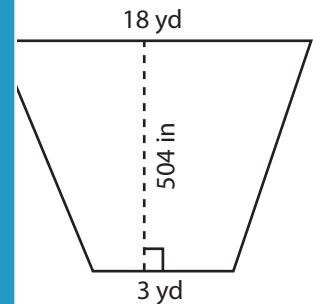
Members, please log in to download this worksheet.

**Log in**

Not a member? Please sign up to gain complete access.

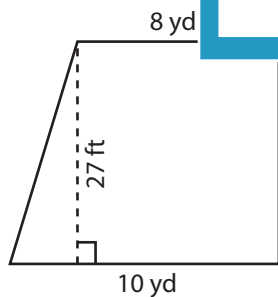
**Sign up**

[www.mathworksheets4kids.com](http://www.mathworksheets4kids.com)

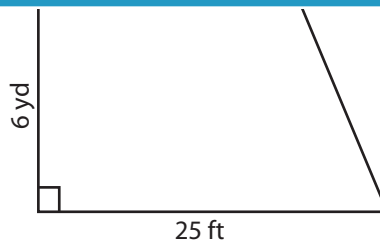


Area = \_\_\_\_\_ yd<sup>2</sup>

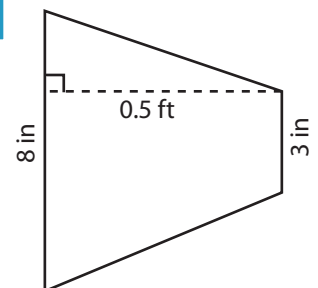
7)



Area = \_\_\_\_\_ yd<sup>2</sup>



Area = \_\_\_\_\_ ft<sup>2</sup>



Area = \_\_\_\_\_ in<sup>2</sup>

Name : \_\_\_\_\_

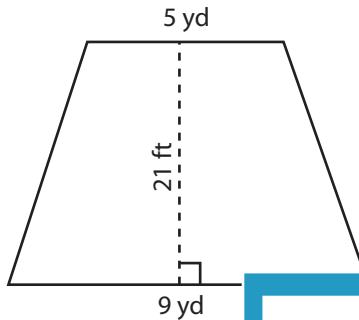
**Answer key**

**Area of Trapezoid**

CS1

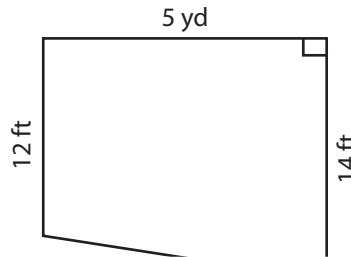
Find the area of each trapezoid.

1)

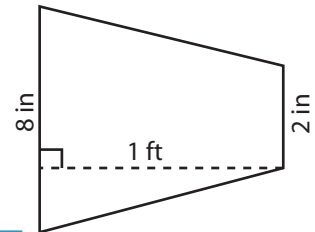


Area = 49

2)

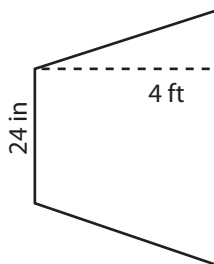


3)



Area = 60 in<sup>2</sup>

4)



Area = 2016

Access the largest collection of worksheets for just **\$19.95** per year!

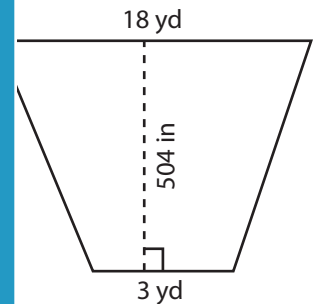
Members, please log in to download this worksheet.

**Log in**

Not a member? Please sign up to gain complete access.

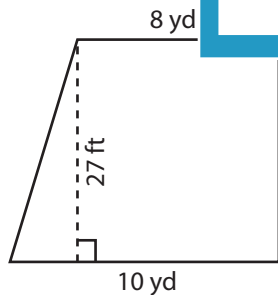
**Sign up**

[www.mathworksheets4kids.com](http://www.mathworksheets4kids.com)

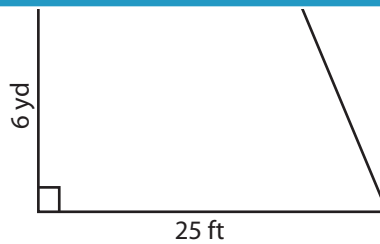


Area = 147 yd<sup>2</sup>

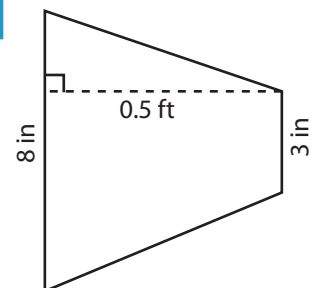
7)



Area = 81 yd<sup>2</sup>



Area = 405 ft<sup>2</sup>



Area = 33 in<sup>2</sup>