

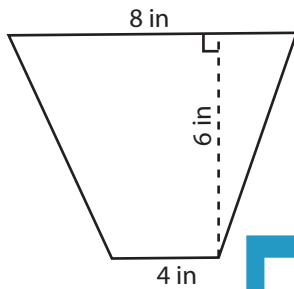
Name : _____

Area of Trapezoid

ES1

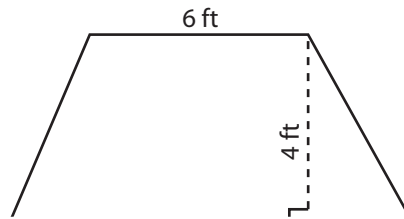
Find the area of each trapezoid.

1)

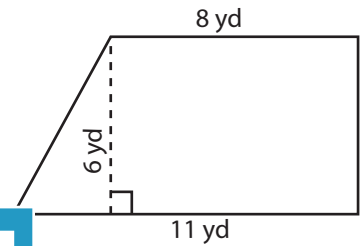


Area = _____

2)

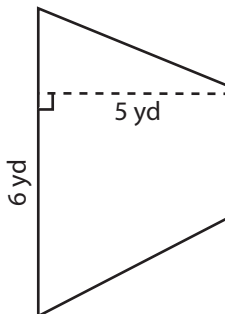


3)



Area = _____

4)



Area = _____

Access the largest collection of worksheets for just **\$19.95** per year!

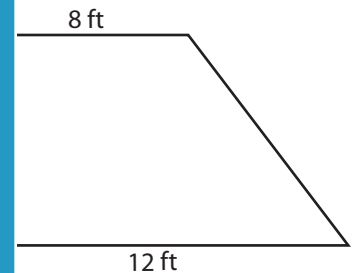
Members, please log in to download this worksheet.

Log in

Not a member? Please sign up to gain complete access.

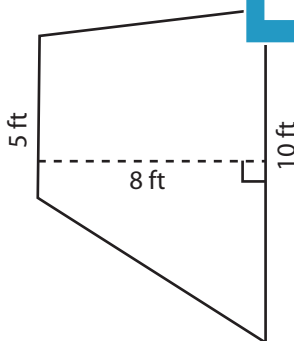
Sign up

www.mathworksheets4kids.com

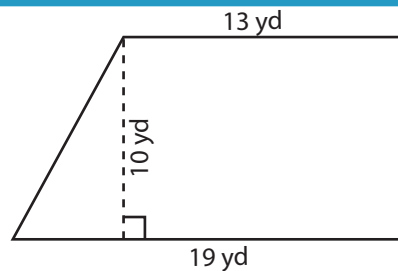


Area = _____

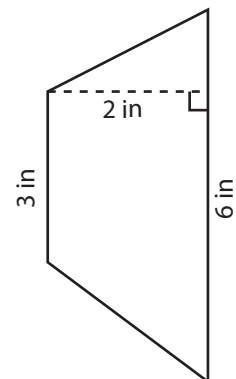
7)



Area = _____



Area = _____



Area = _____

Name : _____

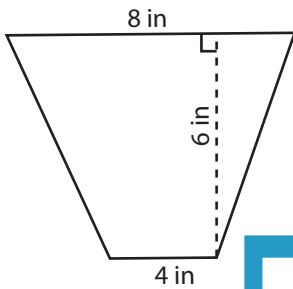
Answer key

Area of Trapezoid

ES1

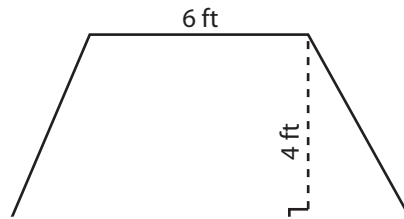
Find the area of each trapezoid.

1)

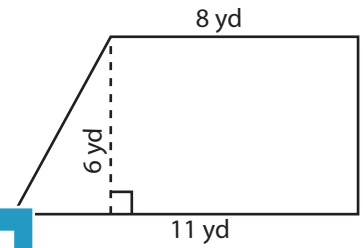


Area = 36 in²

2)

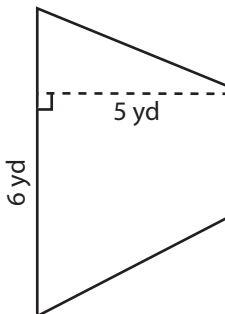


3)



Area = 57 yd²

4)



Area = 25 yd²

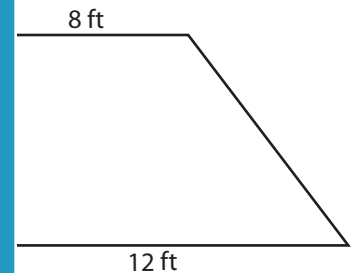
PREVIEW

Access the largest collection of worksheets for just **\$19.95** per year!

Members, please log in to download this worksheet. **Log in**

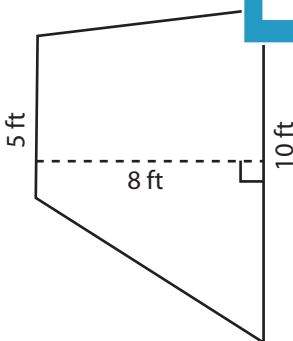
Not a member? Please sign up to gain complete access. **Sign up**

www.mathworksheets4kids.com

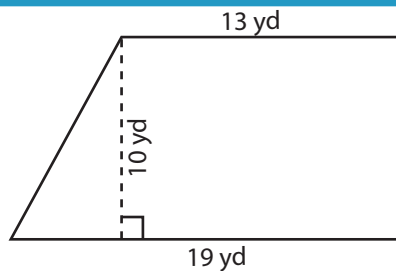


Area = 90 ft²

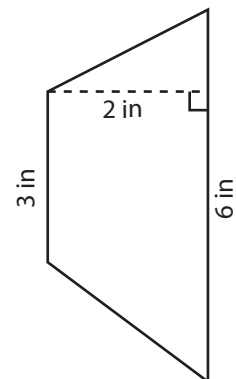
7)



Area = 60 ft²



Area = 160 yd²



Area = 9 in²