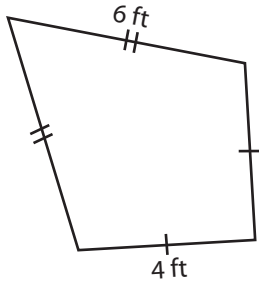


Kite - Perimeter

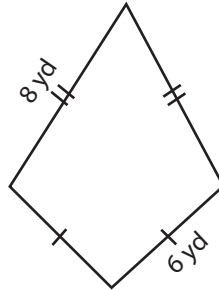
Find the perimeter of each kite.

1)



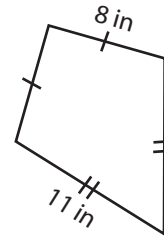
Perimeter = _____

2)



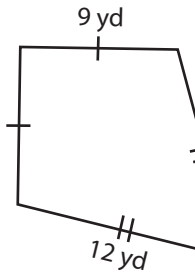
Perimeter = _____

3)

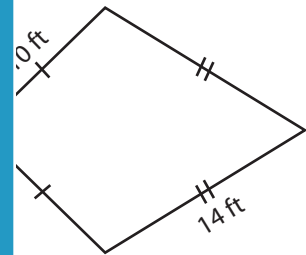


Perimeter = _____

4)

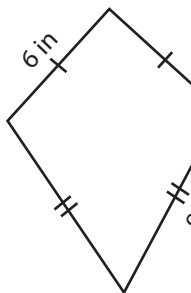


Perimeter = _____

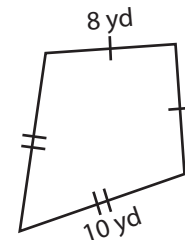


Perimeter = _____

7)



Perimeter = _____



Perimeter = _____

PREVIEW

Access the largest collection of
worksheets for just **\$19.95** per year!

Members, please
log in to
download this
worksheet.

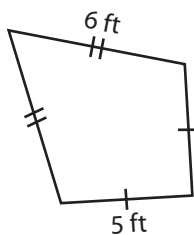
Log in

Not a member?
Please sign up to
gain complete
access.

Sign up

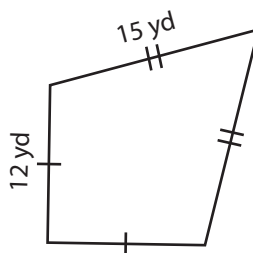
www.mathworksheets4kids.com

10)



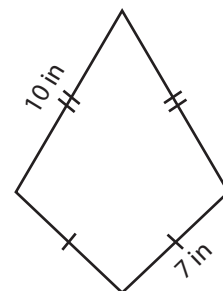
Perimeter = _____

11)



Perimeter = _____

12)



Perimeter = _____

Name : _____

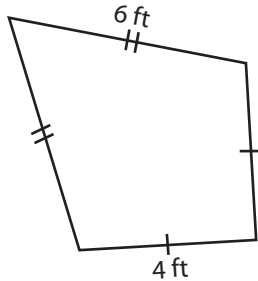
Answer key

Kite - Perimeter

Sheet 1

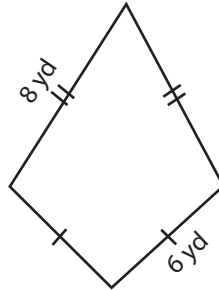
Find the perimeter of each kite.

1)



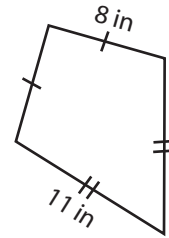
Perimeter = 20 ft

2)



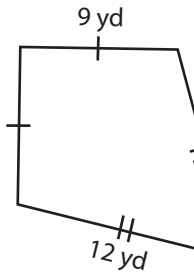
Perimeter = 28 yd

3)



Perimeter = 38 in

4)



Perimeter = 42

PREVIEW

Access the largest collection of worksheets for just **\$19.95** per year!

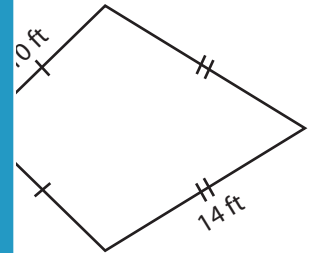
Members, please log in to download this worksheet.

Log in

Not a member? Please sign up to gain complete access.

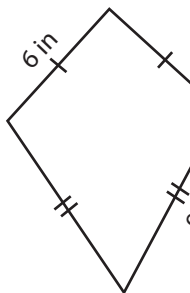
Sign up

www.mathworksheets4kids.com

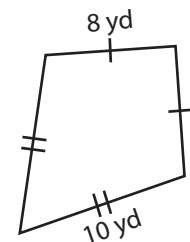


Perimeter = 48 ft

7)

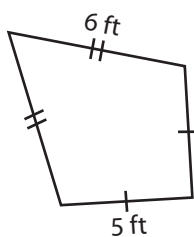


Perimeter = 30



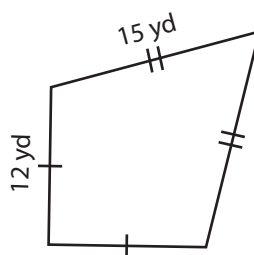
Perimeter = 36 yd

10)



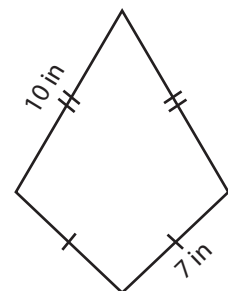
Perimeter = 22 ft

11)



Perimeter = 54 yd

12)



Perimeter = 34 in