

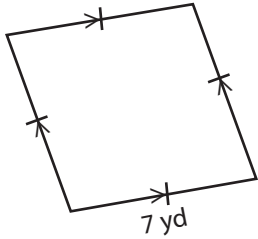
Name : _____

Quadrilateral - Perimeter

Mixed shapes: S2

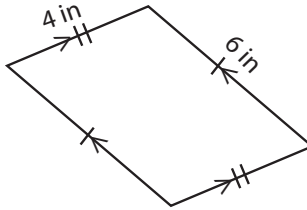
Find the perimeter of each quadrilateral.

1)



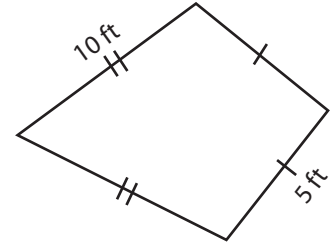
Perimeter = _____

2)



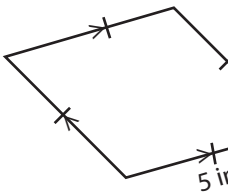
Perimeter = _____

3)



Perimeter = _____

4)



Perimeter = _____

PREVIEW
Access the largest collection of
worksheets for just **\$19.95** per year!

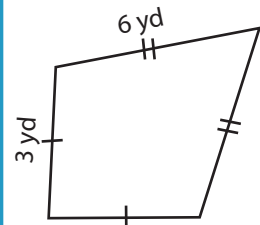
Members, please
log in to
download this
worksheet.

Log in

Not a member?
Please sign up to
gain complete
access.

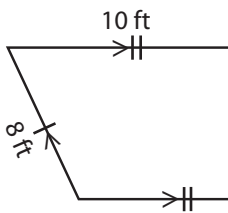
Sign up

www.mathworksheets4kids.com

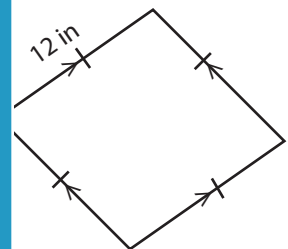


Perimeter = _____

7)

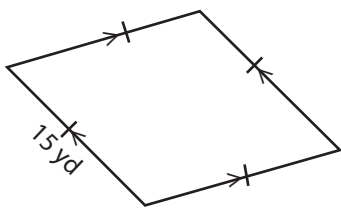


Perimeter = _____



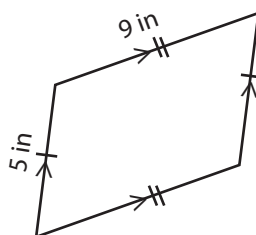
Perimeter = _____

10)



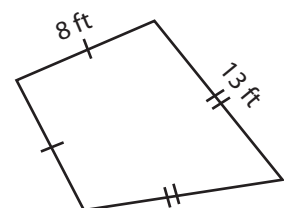
Perimeter = _____

11)



Perimeter = _____

12)



Perimeter = _____

Name : _____

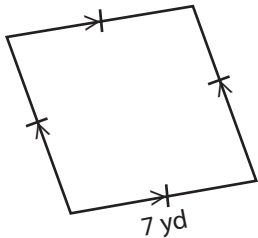
Answer key

Quadrilateral - Perimeter

Mixed shapes: S2

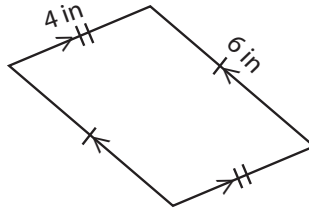
Find the perimeter of each quadrilateral.

1)



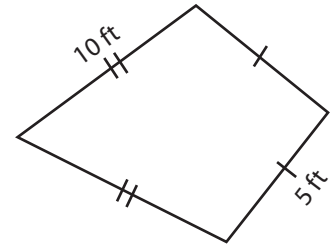
Perimeter = 28 yd

2)



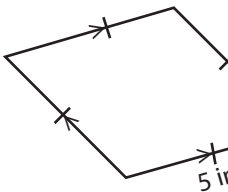
Perimeter = 20 in

3)



Perimeter = 30 ft

4)



Perimeter = 20

PREVIEW
Access the largest collection of
worksheets for just **\$19.95** per year!

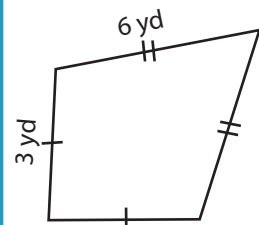
Members, please
log in to
download this
worksheet.

Log in

Not a member?
Please sign up to
gain complete
access.

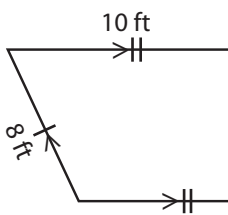
Sign up

www.mathworksheets4kids.com

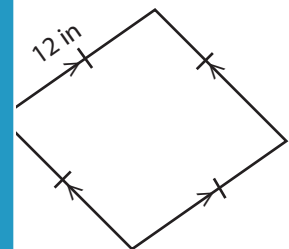


Perimeter = 18 yd

7)

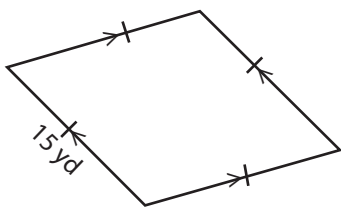


Perimeter = 36



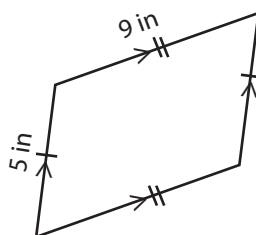
Perimeter = 48 in

10)



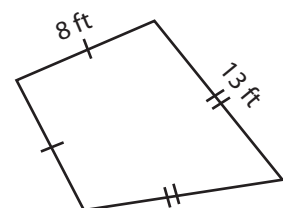
Perimeter = 60 yd

11)



Perimeter = 28 in

12)



Perimeter = 42 ft