

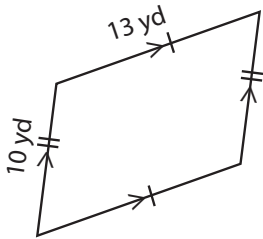
Name : _____

Parallelogram - Perimeter

Sheet 1

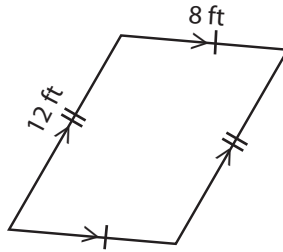
Find the perimeter of each parallelogram.

1)



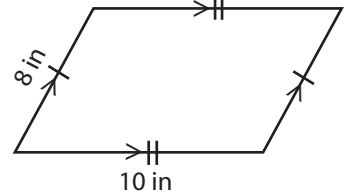
Perimeter = _____

2)



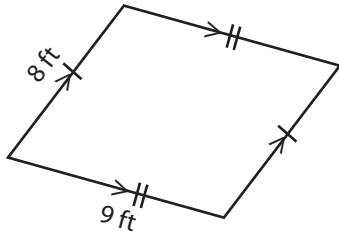
Perimeter = _____

3)



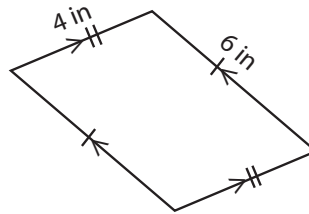
Perimeter = _____

4)



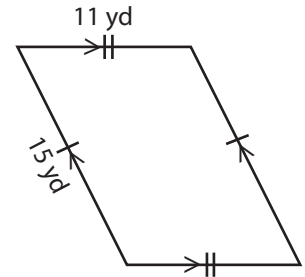
Perimeter = _____

5)



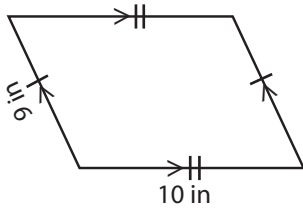
Perimeter = _____

6)



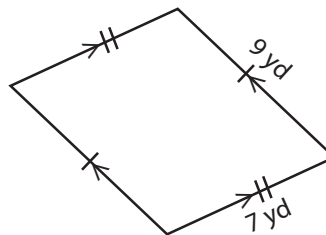
Perimeter = _____

7)



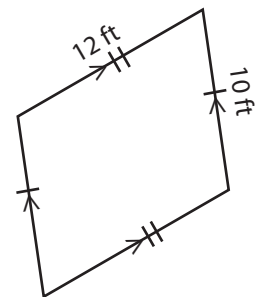
Perimeter = _____

8)



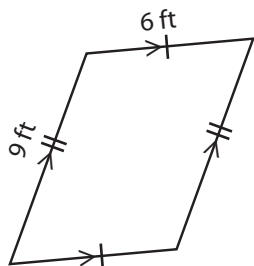
Perimeter = _____

9)



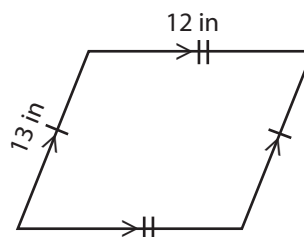
Perimeter = _____

10)



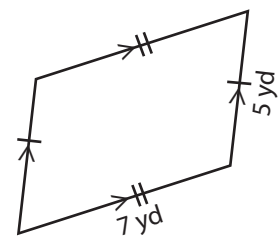
Perimeter = _____

11)



Perimeter = _____

12)



Perimeter = _____

Name : _____

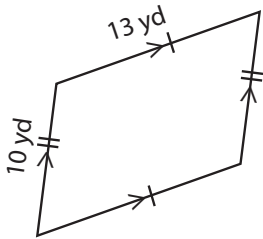
Answer key

Sheet 1

Parallelogram - Perimeter

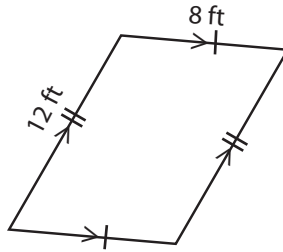
Find the perimeter of each parallelogram.

1)



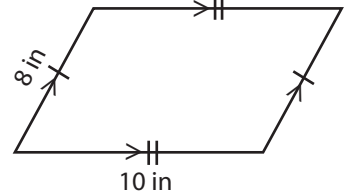
Perimeter = 46 yd

2)



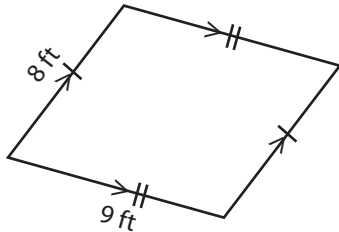
Perimeter = 40 ft

3)



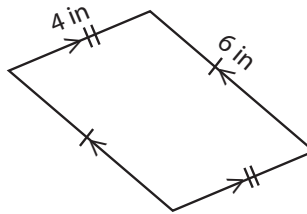
Perimeter = 36 in

4)



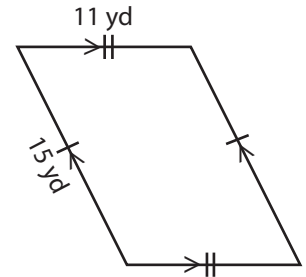
Perimeter = 34 ft

5)



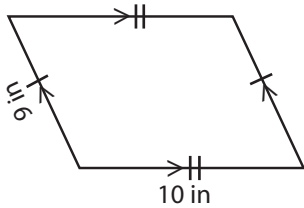
Perimeter = 20 in

6)



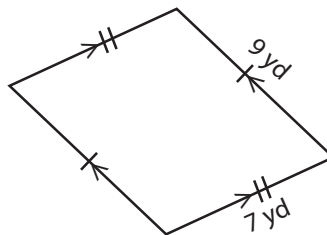
Perimeter = 52 yd

7)



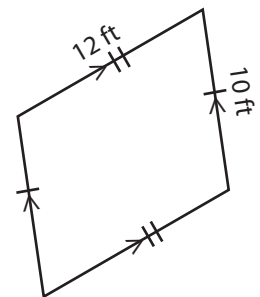
Perimeter = 38 in

8)



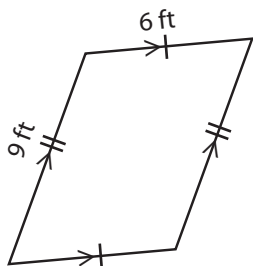
Perimeter = 32 yd

9)



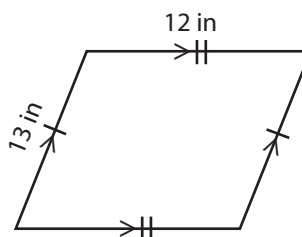
Perimeter = 44 ft

10)



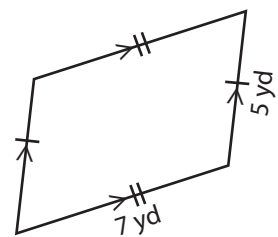
Perimeter = 30 ft

11)



Perimeter = 50 in

12)



Perimeter = 24 yd