

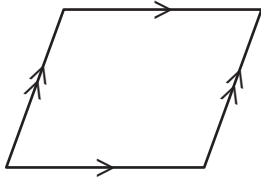
Name : _____

Quadrilaterals

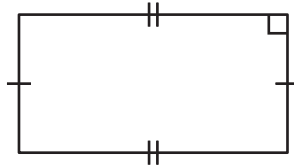
L1S1

Identify each quadrilateral.

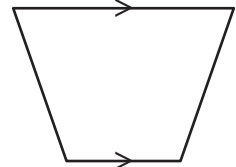
1)



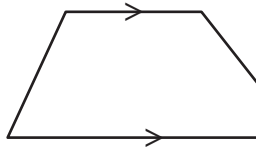
2)



3)



4)



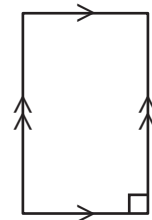
PREVIEW

Gain complete access to the largest collection of worksheets in all subjects!

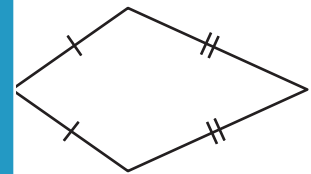
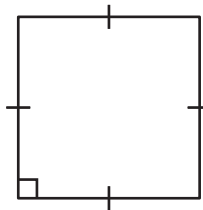
Members, please log in to download this worksheet.

Not a member? Please sign up to gain complete access.

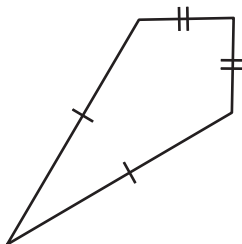
www.mathworksheets4kids.com



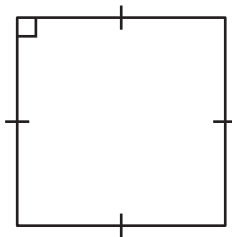
7)



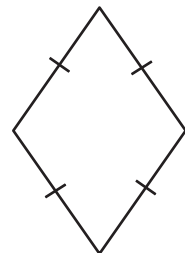
10)



11)



12)



Name : _____

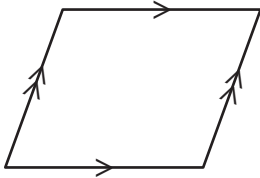
Answer key

Quadrilaterals

L1S1

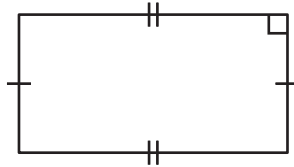
Identify each quadrilateral.

1)



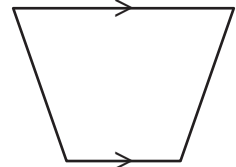
Parallelogram

2)



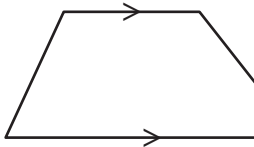
Rectangle

3)



Trapezoid

4)



Trapezoid

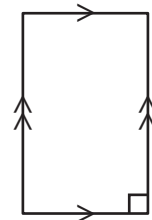
PREVIEW

Gain complete access to the largest collection of worksheets in all subjects!

Members, please log in to download this worksheet.

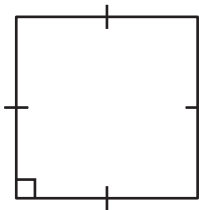
Not a member? Please sign up to gain complete access.

www.mathworksheets4kids.com

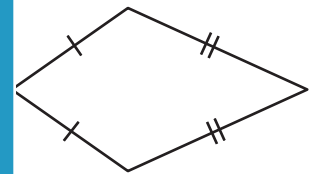


Rectangle

7)

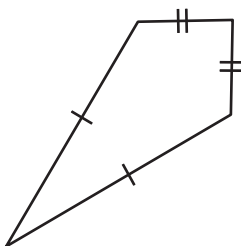


Square



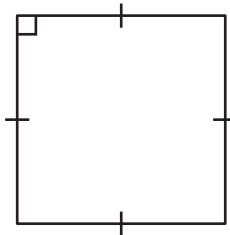
Kite

10)



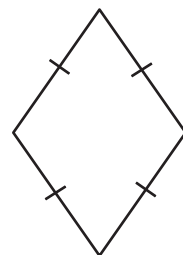
Kite

11)



Square

12)



Rhombus