

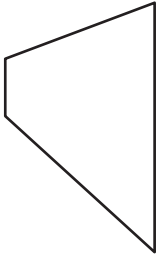
Name : _____

Quadrilaterals

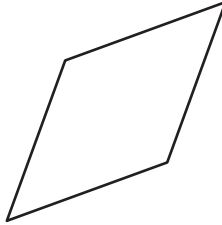
L2S3

Identify each quadrilateral.

1)




2)



3)



4)



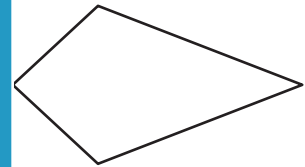
PREVIEW

Gain complete access to the largest collection of worksheets in all subjects!

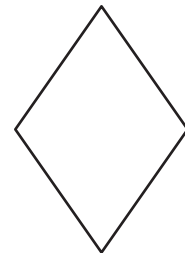
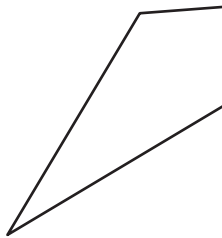
Members, please log in to download this worksheet.

Not a member? Please sign up to gain complete access.

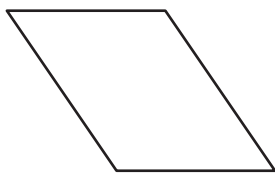
www.mathworksheets4kids.com



7)



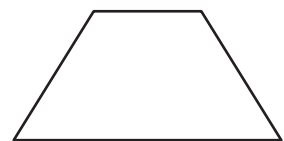
10)



11)



12)



Name : _____

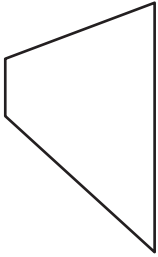
Answer key

Quadrilaterals

L2S3

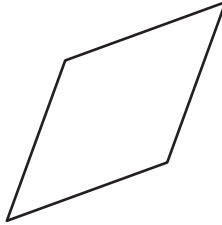
Identify each quadrilateral.

1)



Trapezoid

2)




Rhombus

3)



Rectangle

4)



Square

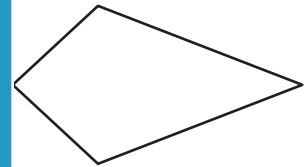
PREVIEW

Gain complete access to the largest collection of worksheets in all subjects!

Members, please log in to download this worksheet.

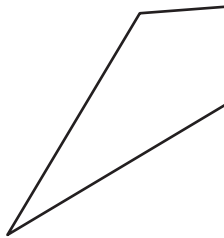
Not a member? Please sign up to gain complete access.

www.mathworksheets4kids.com

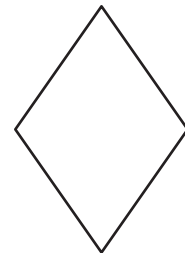


Kite

7)

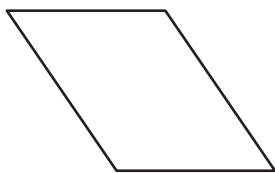


Kite



Rhombus

10)



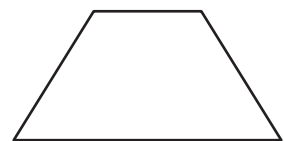
Parallelogram

11)



Rectangle

12)



Trapezoid