

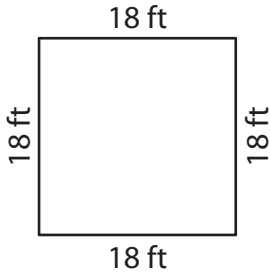
Name : _____

Perimeter of a Quadrilateral

T1L1S1

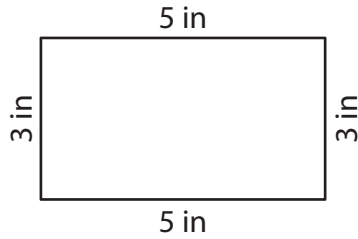
Find the perimeter of each quadrilateral.

1)



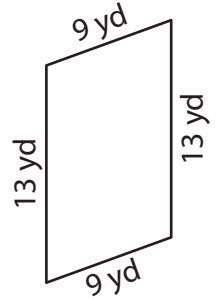
Perimeter = _____

2)



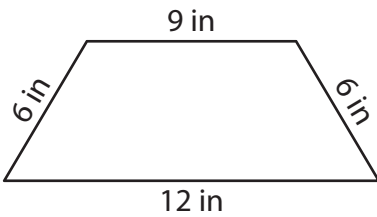
Perimeter = _____

3)



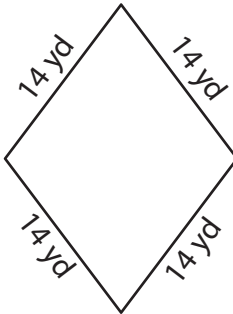
Perimeter = _____

4)



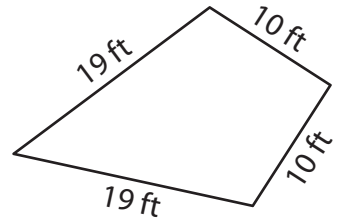
Perimeter = _____

5)



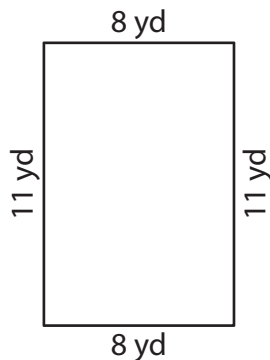
Perimeter = _____

6)



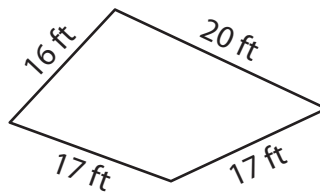
Perimeter = _____

7)



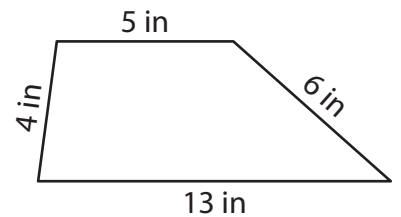
Perimeter = _____

8)



Perimeter = _____

9)



Perimeter = _____

Name: _____

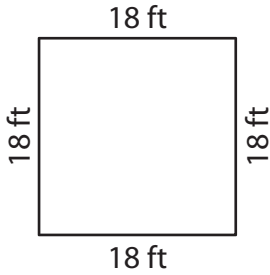
Answer key

Perimeter of a Quadrilateral

T1L1S1

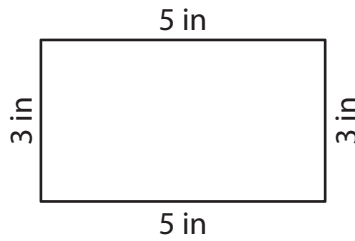
Find the perimeter of each quadrilateral.

1)



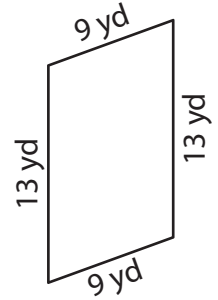
Perimeter = 72 ft

2)



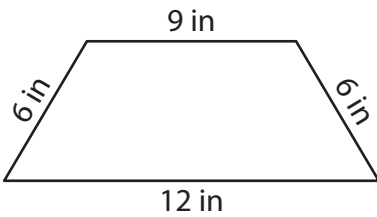
Perimeter = 16 in

3)



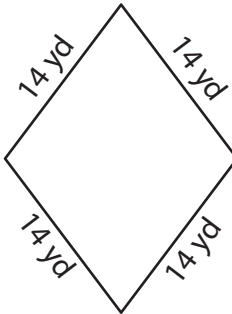
Perimeter = 44 yd

4)



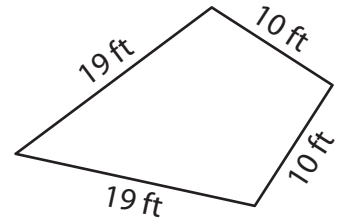
Perimeter = 33 in

5)



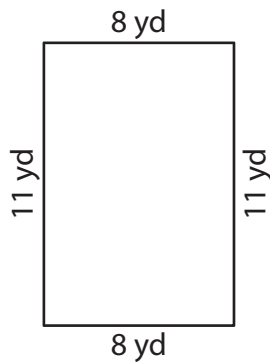
Perimeter = 56 yd

6)



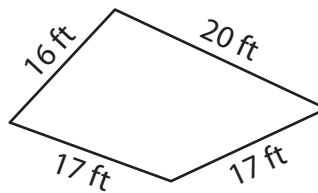
Perimeter = 58 ft

7)



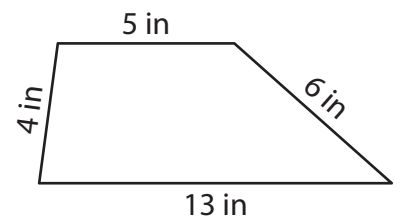
Perimeter = 38 yd

8)



Perimeter = 70 ft

9)



Perimeter = 28 in