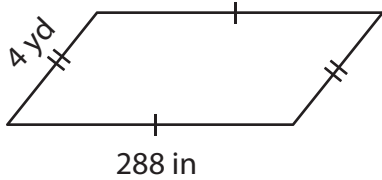


Name : _____

Perimeter of a Quadrilateral

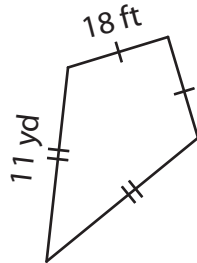
Find the perimeter of each quadrilateral.

1)

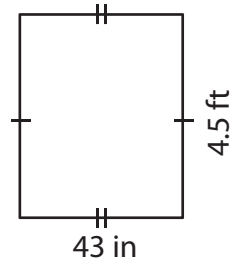


Perimeter = _____

2)

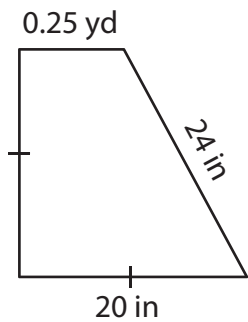


3)



Perimeter = _____ in

4)



Perimeter = _____

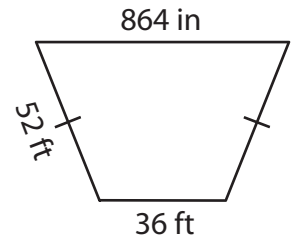
PREVIEW

Gain complete access to the largest collection of worksheets in all subjects!

Members, please log in to download this worksheet.

Not a member? Please sign up to gain complete access.

www.mathworksheets4kids.com



Perimeter = _____ ft

7) The length of a rectangle

is 120 inches and its width is 12 inches?

_____ inches

8) Determine the perimeter of the kite, if the sides of a kite measure 8 yards and 36 inches.

_____ yards

Name: _____

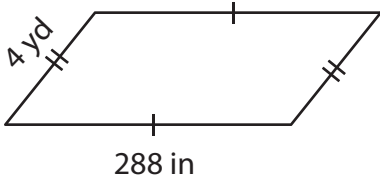
Answer key

Sheet 2

Perimeter of a Quadrilateral

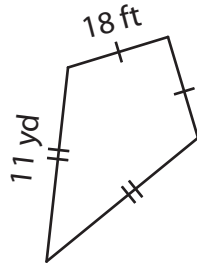
Find the perimeter of each quadrilateral.

1)

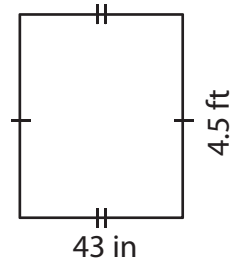


Perimeter = 24)

2)

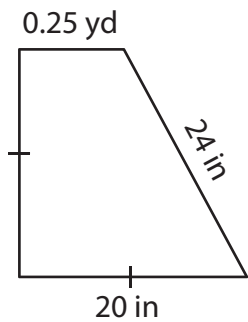


3)



Perimeter = 194 in

4)



Perimeter = 73 i

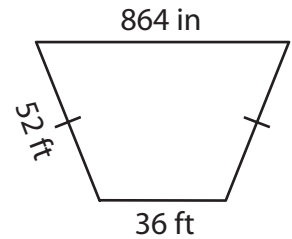
PREVIEW

Gain complete access to the largest collection of worksheets in all subjects!

Members, please log in to download this worksheet.

Not a member? Please sign up to gain complete access.

www.mathworksheets4kids.com



Perimeter = 212 ft

7) The length of a rectangle

width is 12 inches?

120 inches

8) Determine the perimeter of the kite, if the sides of a kite measure 8 yards and 36 inches.

18 yards