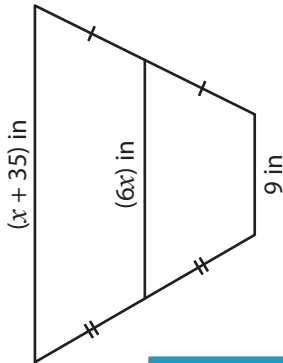


Trapezoids

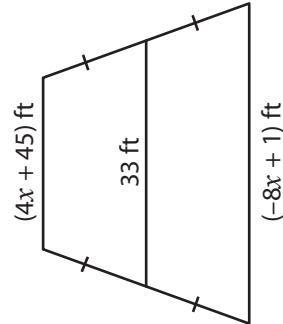
A) Find the value of x .

1)

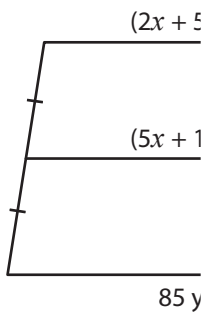


$x =$ _____

2)



3)

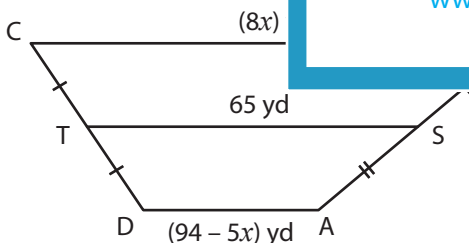


$x =$ _____



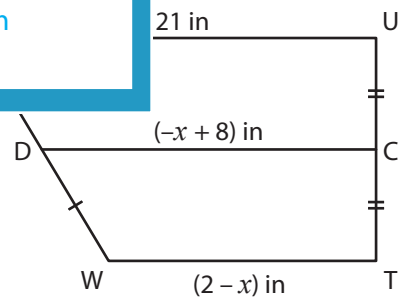
B) Solve for x and the

1)



$x =$ _____

BC = _____ ; AD = _____



$x =$ _____

CD = _____ ; TW = _____

PREVIEW

Gain complete access to the largest collection of worksheets in all subjects!

Members, please log in to download this worksheet.

Not a member? Please sign up to gain complete access.

www.mathworksheets4kids.com