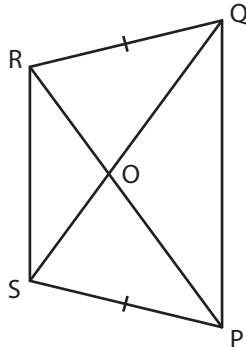


Isosceles Trapezoids

Find the indicated measure in each isosceles trapezoid.

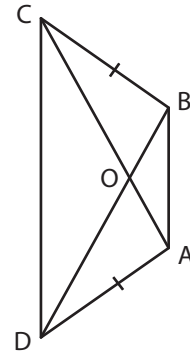
1)



$QS = 41$ in ;

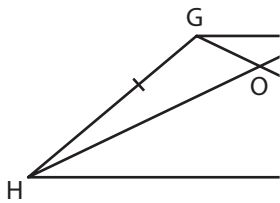
$OP =$ _____

2)



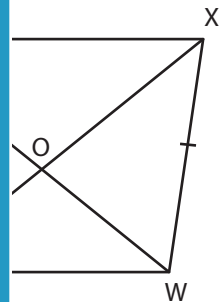
_____ yd ; $OB = 35$ yd

3)



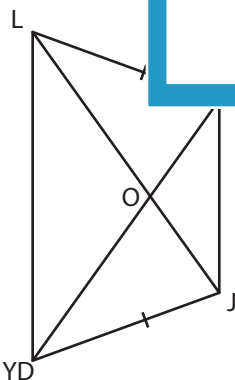
$OG = 6$ yd ; $CO =$ _____

$FH =$ _____



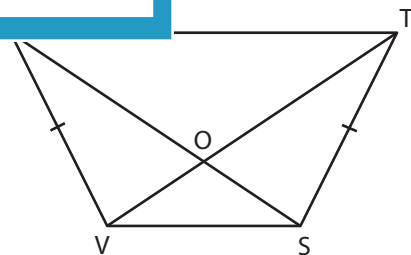
_____ ft ; $XZ = 83$ ft

5)



$OL = 64$ ft ; $OJ = 26$ ft

$KYD =$ _____



$SU = 49$ in

$TV =$ _____

PREVIEW

Gain complete access to the largest collection of worksheets in all subjects!

Members, please log in to download this worksheet.

Not a member? Please sign up to gain complete access.

www.mathworksheets4kids.com