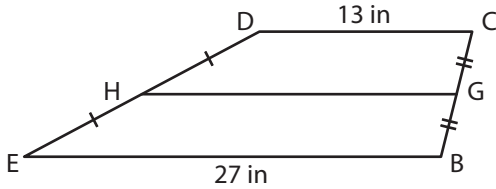


# Trapezoids

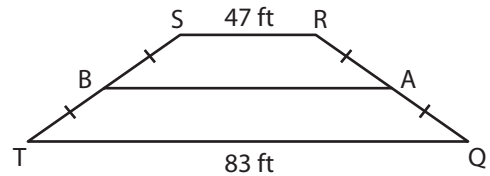
A) Find the length of the midsegment of each trapezoid.

1)



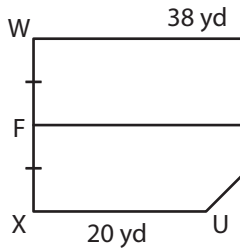
GH = \_\_\_\_\_

2)



AB = \_\_\_\_\_

3)



EF = \_\_\_\_\_



## PREVIEW

Gain complete access to the largest collection of worksheets in all subjects!

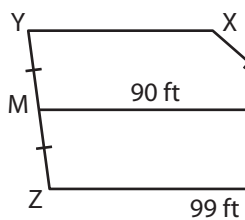
Members, please log in to download this worksheet.

Not a member? Please sign up to gain complete access.

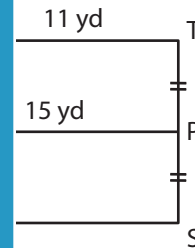
www.mathworksheets4kids.com

B) Find the missing measure.

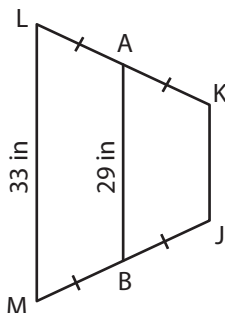
1)



XY = \_\_\_\_\_

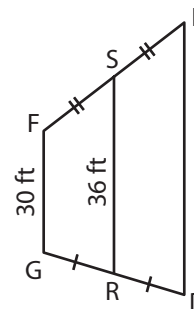


3)



JK = \_\_\_\_\_

4)



DE = \_\_\_\_\_