

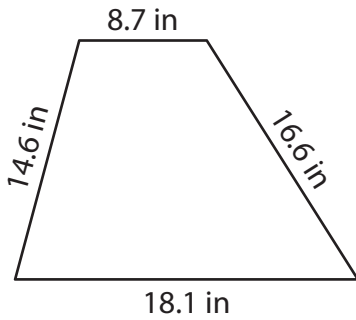
Name : _____

Perimeter of a Trapezoid

Sheet 1

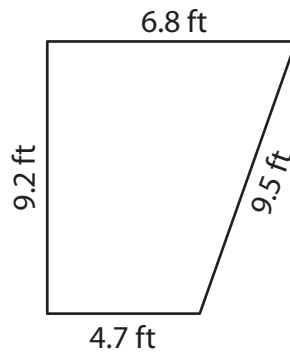
Find the perimeter of each trapezoid.

1)



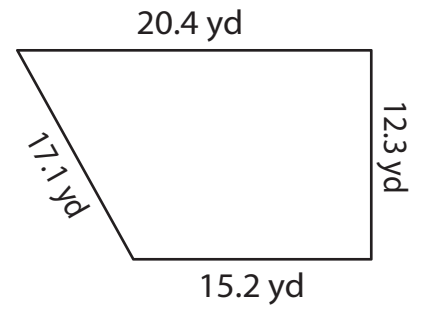
Perimeter = _____

2)



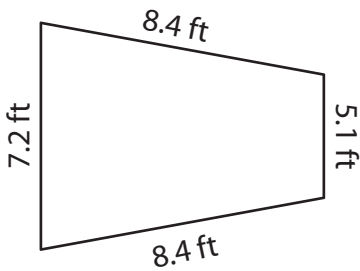
Perimeter = _____

3)



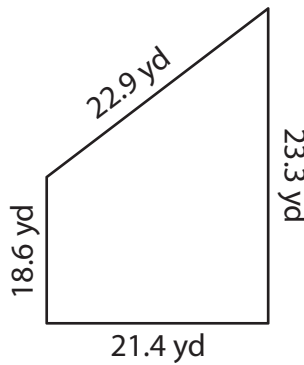
Perimeter = _____

4)



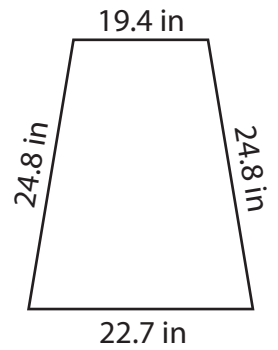
Perimeter = _____

5)



Perimeter = _____

6)



Perimeter = _____

- 7) The parallel bases of a trapezoid measure 21.7 yards and 17.3 yards. If the legs measure 13.9 yards and 12.6 yards, determine the perimeter of the trapezoid.

- 8) Find the perimeter of the trapezoid, if its sides measure 5.3 inches, 9.6 inches, 7.1 inches and 10.8 inches.

Name : _____

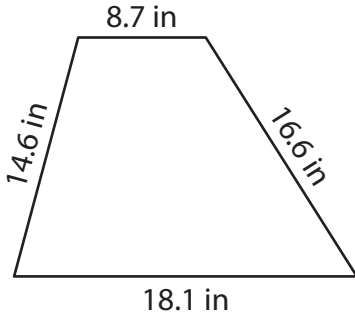
Answer key

Sheet 1

Perimeter of a Trapezoid

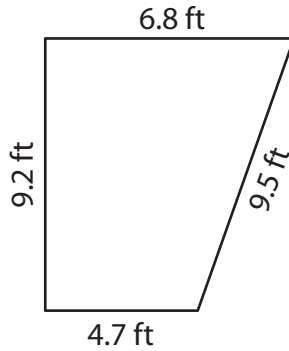
Find the perimeter of each trapezoid.

1)



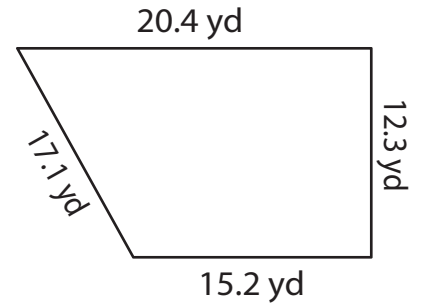
Perimeter = 58 in

2)



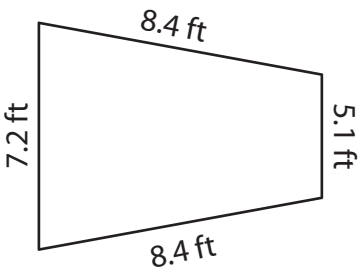
Perimeter = 30.2 ft

3)



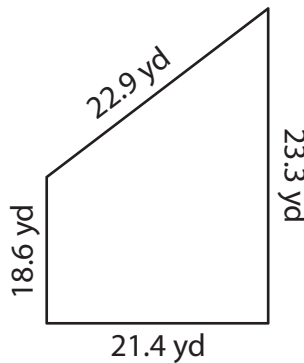
Perimeter = 65 yd

4)



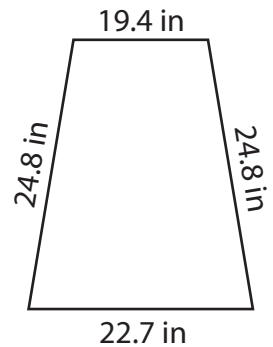
Perimeter = 29.1 ft

5)



Perimeter = 86.2 yd

6)



Perimeter = 91.7 in

7) The parallel bases of a trapezoid measure 21.7 yards and 17.3 yards. If the legs measure 13.9 yards and 12.6 yards, determine the perimeter of the trapezoid.

65.5 yards

8) Find the perimeter of the trapezoid, if its sides measure 5.3 inches, 9.6 inches, 7.1 inches and 10.8 inches.

32.8 inches