

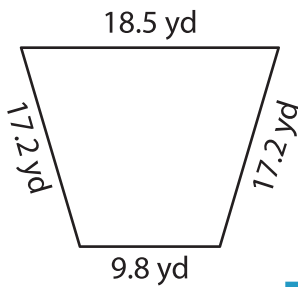
Name : \_\_\_\_\_

## Perimeter of a Trapezoid

Sheet 3

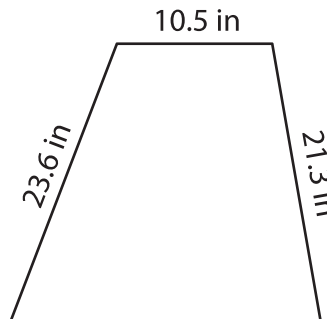
Find the perimeter of each trapezoid.

1)

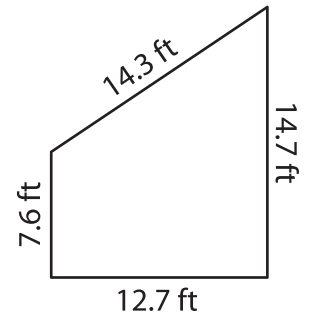


Perimeter = \_\_\_\_\_

2)

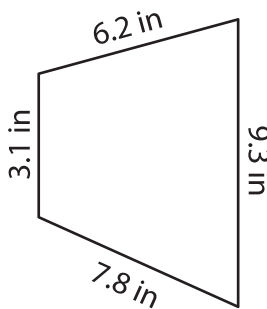


3)



Perimeter = \_\_\_\_\_

4)



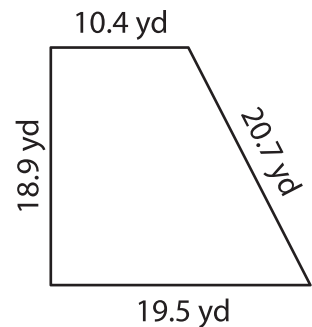
Perimeter = \_\_\_\_\_

**PREVIEW**  
Gain complete access to the largest collection of worksheets in all subjects!

Members, please log in to download this worksheet.

Not a member? Please sign up to gain complete access.

[www.mathworksheets4kids.com](http://www.mathworksheets4kids.com)



Perimeter = \_\_\_\_\_

7) If the sides of a trapezoid

determine its perimeter.

8) The parallel bases of an isosceles trapezoid measure 22.6 yards and 25.1 yards. If each leg measures 18.8 yards, find the perimeter of the isosceles trapezoid.