

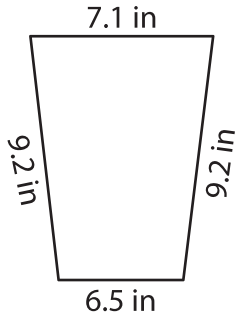
Name : _____

Perimeter of a Trapezoid

Sheet 4

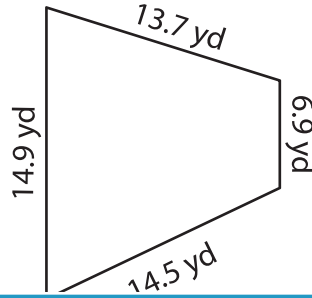
Find the perimeter of each trapezoid.

1)

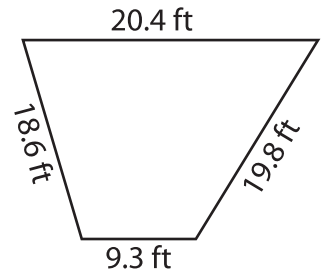


Perimeter = _____

2)

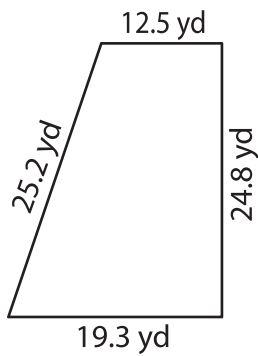


3)

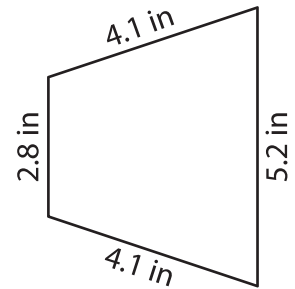


Perimeter = _____

4)



Perimeter = _____



Perimeter = _____

7) Find the perimeter of the trapezoid with sides of 12.5 feet, 18.4 feet and 21.3 feet.

8) If the sides of a trapezoid measure 8.7 inches, 5.4 inches, 10.2 inches and 13.5 inches, determine its perimeter.

PREVIEW

Gain complete access to the largest collection of worksheets in all subjects!

Members, please log in to download this worksheet.

Not a member? Please sign up to gain complete access.

www.mathworksheets4kids.com