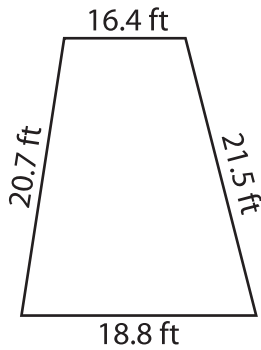


Name : \_\_\_\_\_

## Perimeter of a Trapezoid

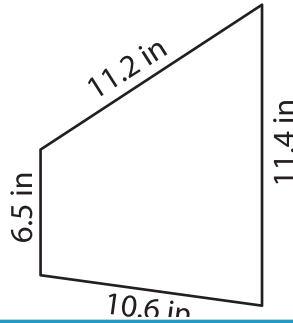
Find the perimeter of each trapezoid.

1)

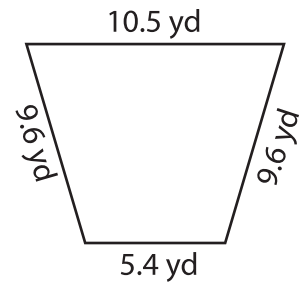


Perimeter = \_\_\_\_\_

2)

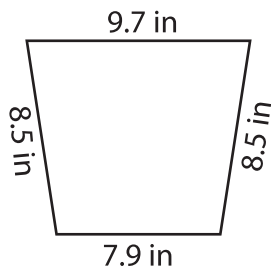


3)

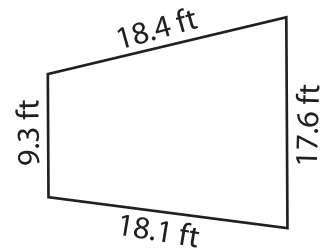


Perimeter = \_\_\_\_\_

4)



Perimeter = \_\_\_\_\_



Perimeter = \_\_\_\_\_

7) The parallel bases of an isosceles trapezoid are 10.5 cm and 15.2 cm. The slanted sides are 8.7 cm each. Find the perimeter of the trapezoid.

8) Find the perimeter of a trapezoid with parallel bases of 12.3 m and 18.7 m, and slanted sides of 10.1 m and 14.5 m.

**PREVIEW**

Gain complete access to the largest collection of worksheets in all subjects!

Members, please log in to download this worksheet.

Not a member? Please sign up to gain complete access.

[www.mathworksheets4kids.com](http://www.mathworksheets4kids.com)

8) The sides of a trapezoid measure 17.5 feet, 14.9 feet, 15.7 feet and 16.2 feet. What is the perimeter of the trapezoid?