

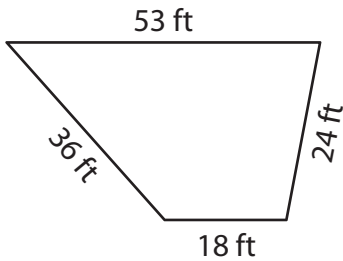
Name : _____

Perimeter of a Trapezoid

L2S1

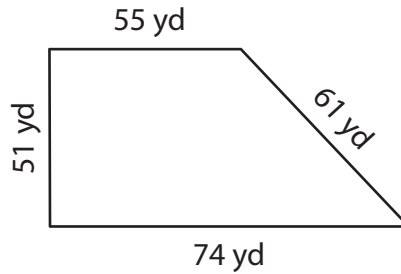
Find the perimeter of each trapezoid.

1)



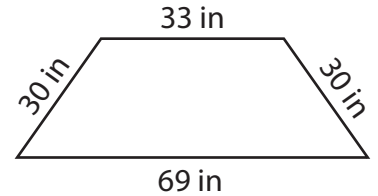
Perimeter = _____

2)



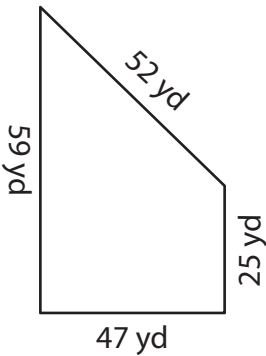
Perimeter = _____

3)



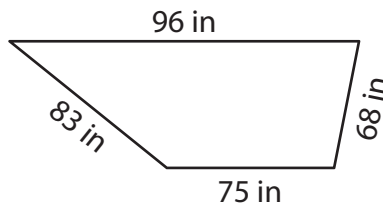
Perimeter = _____

4)



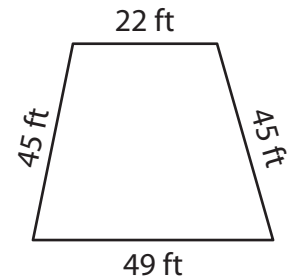
Perimeter = _____

5)



Perimeter = _____

6)



Perimeter = _____

- 7) The parallel bases of an isosceles trapezoid measure 58 feet and 40 feet. If each leg measures 29 feet, determine the perimeter of the isosceles trapezoid.

- 8) The sides of a trapezoid measure 89 yards, 72 yards, 43 yards and 54 yards. What is the perimeter of the trapezoid?

Name : _____

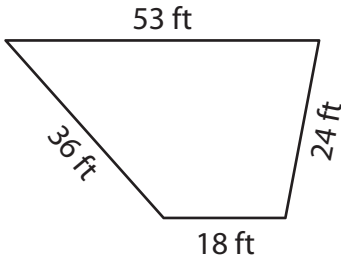
Answer key

Perimeter of a Trapezoid

L2S1

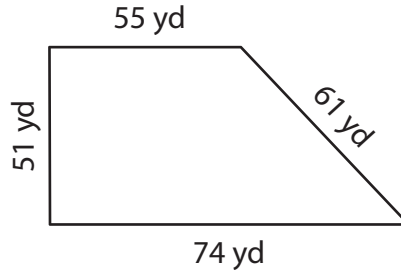
Find the perimeter of each trapezoid.

1)



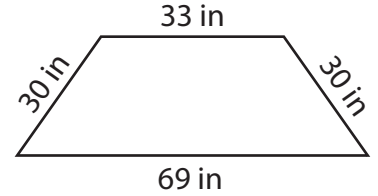
Perimeter = 131 ft

2)



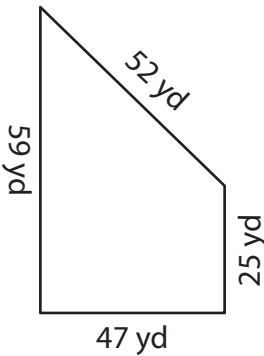
Perimeter = 241 yd

3)



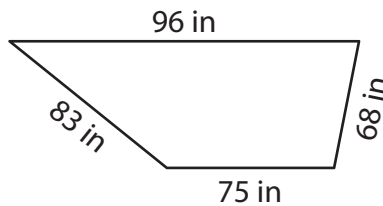
Perimeter = 162 in

4)



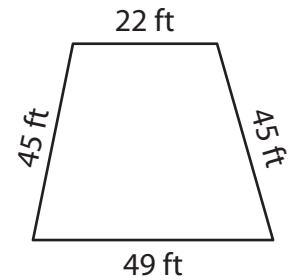
Perimeter = 183 yd

5)



Perimeter = 322 in

6)



Perimeter = 165 ft

7) The parallel bases of an isosceles trapezoid measure 58 feet and 40 feet. If each leg measures 29 feet, determine the perimeter of the isosceles trapezoid.

156 feet

8) The sides of a trapezoid measure 89 yards, 72 yards, 43 yards and 54 yards. What is the perimeter of the trapezoid?

258 yards