

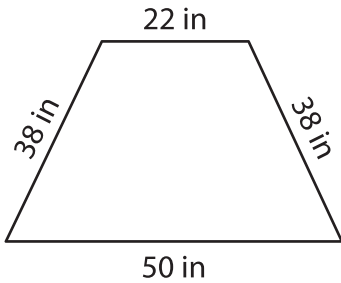
Name : \_\_\_\_\_

L2S2

## Perimeter of a Trapezoid

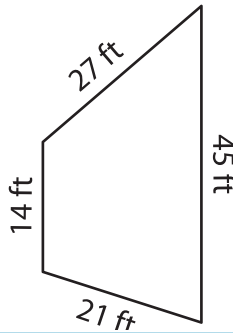
Find the perimeter of each trapezoid.

1)

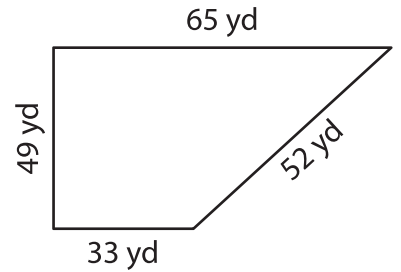


Perimeter = \_\_\_\_\_

2)

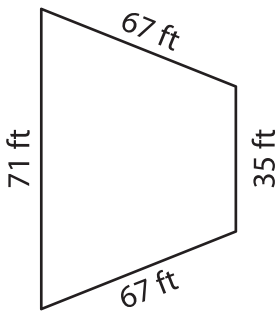


3)



Perimeter = \_\_\_\_\_

4)



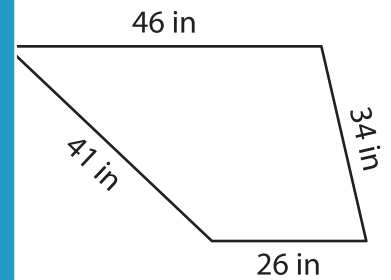
Perimeter = \_\_\_\_\_

**PREVIEW**  
Gain complete access to the largest collection of worksheets in all subjects!

Members, please log in to download this worksheet.

Not a member? Please sign up to gain complete access.

[www.mathworksheets4kids.com](http://www.mathworksheets4kids.com)



Perimeter = \_\_\_\_\_

7) If the sides of a trapezoid

es, find its perimeter.

8) The parallel bases of a trapezoid measure 76 feet and 62 feet. If the legs measure 31 feet and 13 feet, determine the perimeter of the trapezoid.