

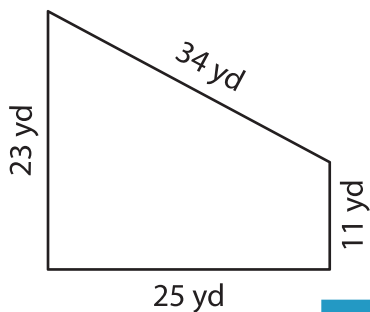
Name : \_\_\_\_\_

L2S3

## Perimeter of a Trapezoid

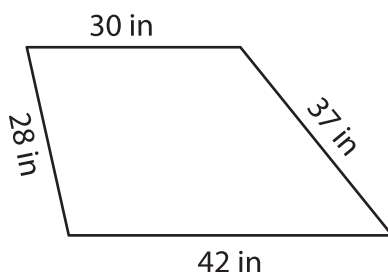
Find the perimeter of each trapezoid.

1)

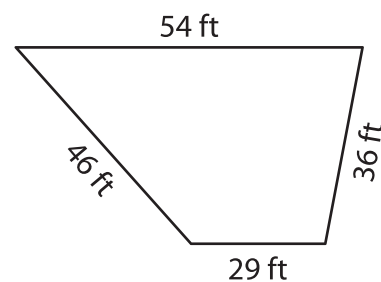


Perimeter = \_\_\_\_\_

2)

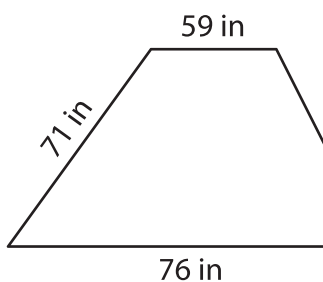


3)

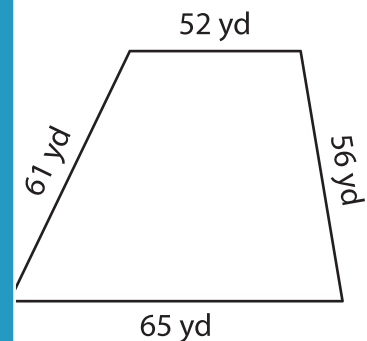


Perimeter = \_\_\_\_\_

4)



Perimeter = \_\_\_\_\_



Perimeter = \_\_\_\_\_

7) Find the perimeter of the

yards and 44 yards.

# PREVIEW

Gain complete access to the largest collection of worksheets in all subjects!

Members, please log in to download this worksheet.

Not a member? Please sign up to gain complete access.

[www.mathworksheets4kids.com](http://www.mathworksheets4kids.com)

8) The parallel bases of an isosceles trapezoid measure 57 inches and 19 inches. Find the perimeter of the isosceles trapezoid, if its each leg measures 60 inches.