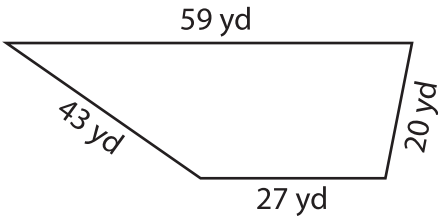


Name : _____

Perimeter of a Trapezoid

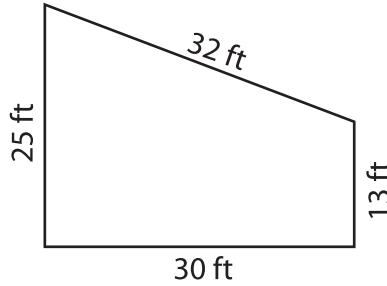
Find the perimeter of each trapezoid.

1)

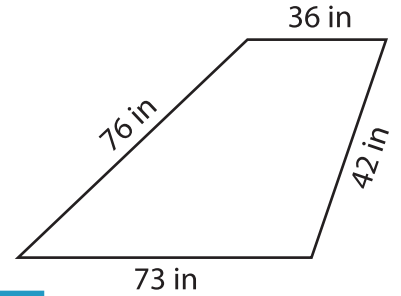


Perimeter = _____

2)

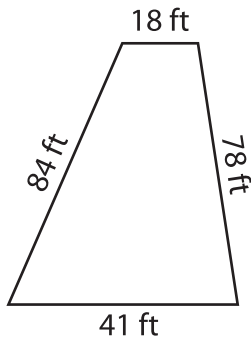


3)

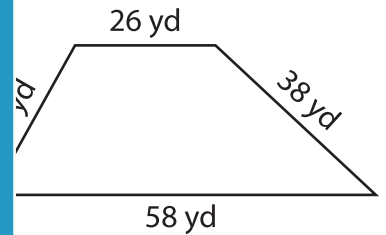


Perimeter = _____

4)



Perimeter = _____



Perimeter = _____

7) The sides of a trapezoid are 12 ft, 18 ft, 15 ft, and 20 ft. What is the perimeter of the trapezoid?

8) The parallel bases of an isosceles trapezoid measure 60 yards and 34 yards. If each leg measures 29 yards, determine the perimeter of the isosceles trapezoid.

PREVIEW

Gain complete access to the largest collection of worksheets in all subjects!

Members, please log in to download this worksheet.

Not a member? Please sign up to gain complete access.

www.mathworksheets4kids.com
