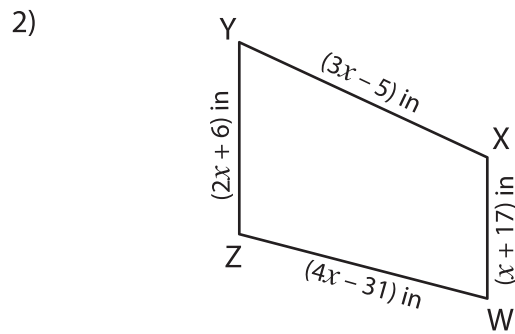
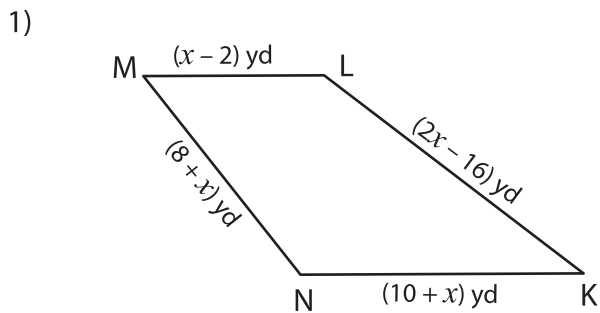


Perimeter of a Trapezoid

Solve for x and then find the indicated side lengths in each trapezoid.



Perimeter = 180 yd ; $x =$ _____

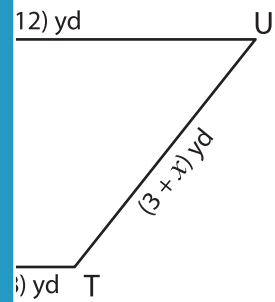
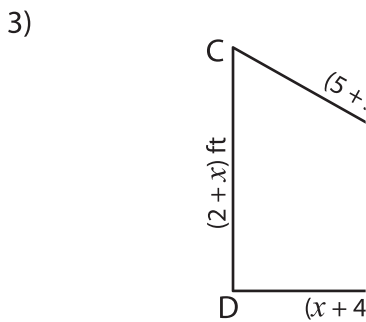
Perimeter = 237 in ; $x =$ _____

LM = _____ ;

WX = _____

NK = _____ ;

YZ = _____



Perimeter = 57 ft ;

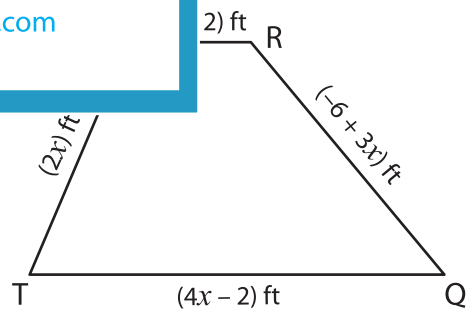
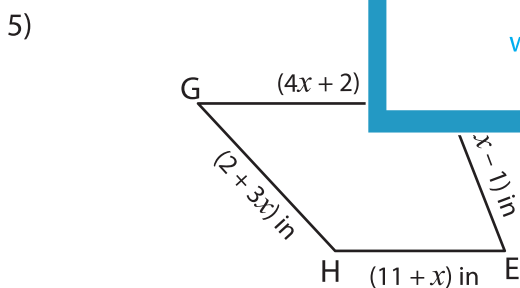
$x =$ _____

BC = _____ ;

TU = _____

DA = _____ ;

VW = _____



Perimeter = 104 in ; $x =$ _____

Perimeter = 112 ft ; $x =$ _____

FG = _____ ; EF = _____

RS = _____ ; QR = _____

HE = _____ ; GH = _____

TQ = _____ ; ST = _____

PREVIEW

Gain complete access to the largest collection of worksheets in all subjects!

Members, please log in to download this worksheet.

Not a member? Please sign up to gain complete access.

www.mathworksheets4kids.com