

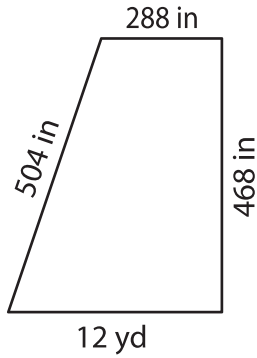
Name : _____

Perimeter of a Trapezoid

Sheet 3

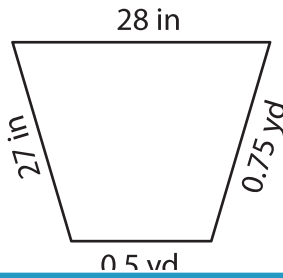
Find the perimeter of each trapezoid.

1)

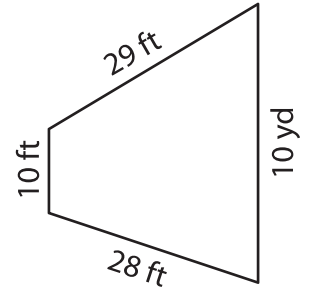


Perimeter = _____

2)

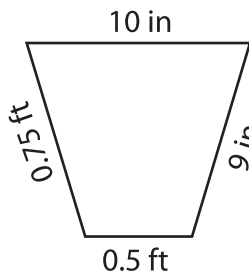


3)



Perimeter = _____ ft

4)



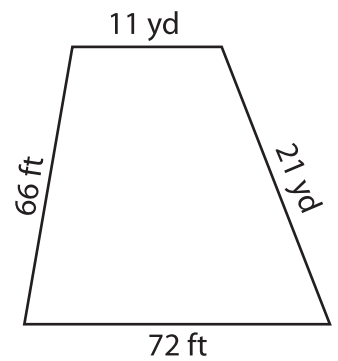
Perimeter = _____

PREVIEW
Gain complete access to the largest collection of worksheets in all subjects!

Members, please log in to download this worksheet.

Not a member? Please sign up to gain complete access.

www.mathworksheets4kids.com



Perimeter = _____ yd

7) The parallel bases of an isosceles trapezoid are 10 feet and 2 feet, determine the perimeter.

8) If each leg measures 10 feet, determine the perimeter.

_____ inches

8) Determine the perimeter of the trapezoid, if its sides measure 15 feet, 7 feet, 10 yards and 13 feet.

_____ feet