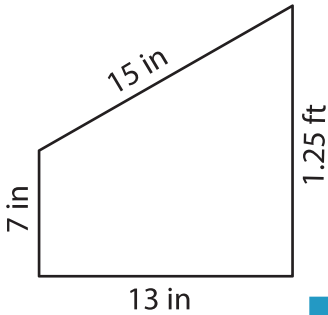


Name : _____

Perimeter of a Trapezoid

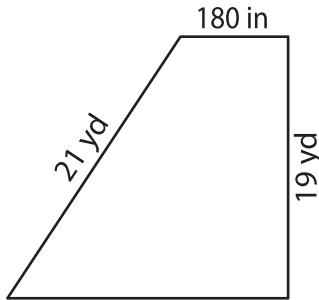
Find the perimeter of each trapezoid.

1)

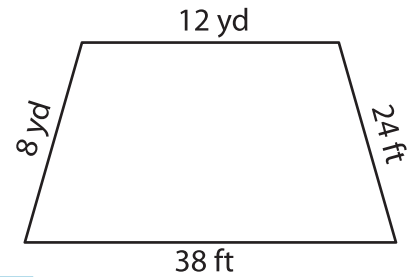


Perimeter = _____

2)

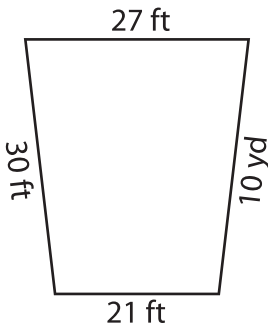


3)

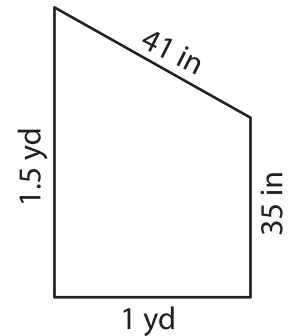


Perimeter = _____ ft

4)



Perimeter = _____



Perimeter = _____ in

7) The parallel bases of a trapezoid measure 31 feet and 28 feet, determine the perimeter.

_____ feet

8) The sides of a trapezoid measure 81 feet, 18 yards, 45 feet and 69 feet. What is the perimeter of the trapezoid?

_____ yards

PREVIEW

Gain complete access to the largest collection of worksheets in all subjects!

Members, please log in to download this worksheet.

Not a member? Please sign up to gain complete access.

www.mathworksheets4kids.com