

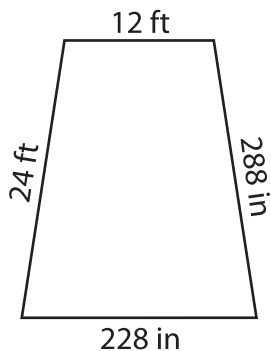
Name : \_\_\_\_\_

## Perimeter of a Trapezoid

Sheet 5

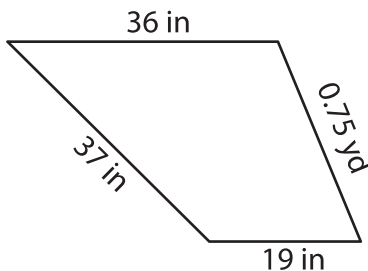
Find the perimeter of each trapezoid.

1)

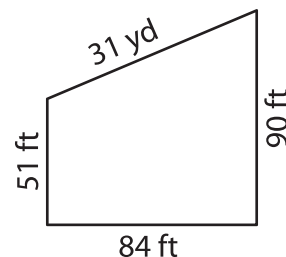


Perimeter = \_\_\_\_\_

2)

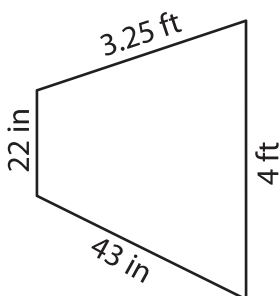


3)



Perimeter = \_\_\_\_\_ yd

4)



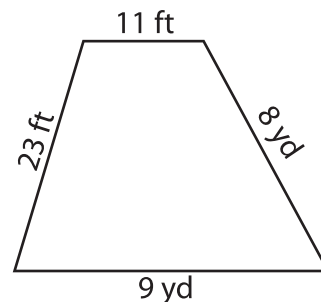
Perimeter = \_\_\_\_\_

**PREVIEW**  
Gain complete access to the largest collection of worksheets in all subjects!

Members, please log in to download this worksheet.

Not a member? Please sign up to gain complete access.

[www.mathworksheets4kids.com](http://www.mathworksheets4kids.com)



Perimeter = \_\_\_\_\_ ft

7) Determine the perimeter of a trapezoid with sides 7 inches, 19 inches, 11 inches, and 10 inches.

Perimeter = \_\_\_\_\_ inches

\_\_\_\_\_ inches

8) If the sides of a trapezoid measure 7 yards, 11 feet, 29 feet and 10 yards, find its perimeter.

\_\_\_\_\_ feet