

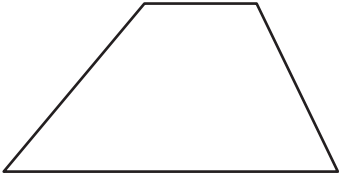
Name : \_\_\_\_\_

# Trapezoids

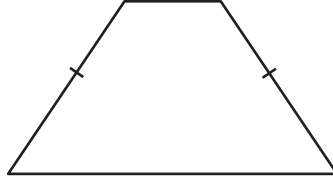
Sheet 1

Name the types of each trapezoid.

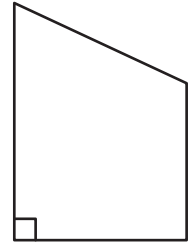
1)




2)



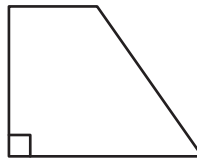
3)



4)



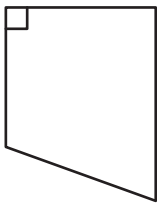
5)



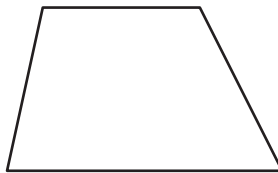
6)




7)



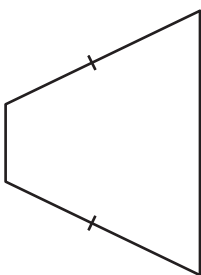
8)



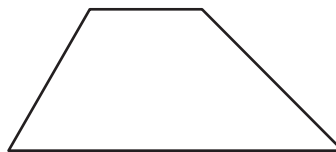
9)



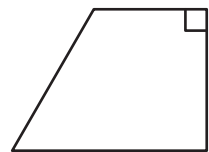
10)



11)



12)



Name : \_\_\_\_\_

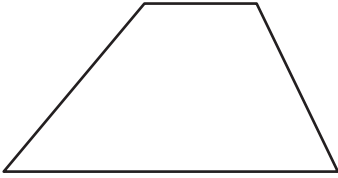
## Answer key

Sheet 1

# Trapezoids

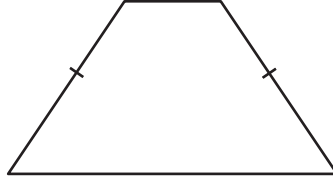
Name the types of each trapezoid.

1)



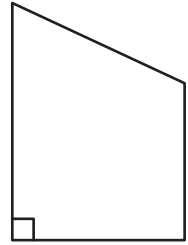
**scalene trapezoid**

2)



**isosceles trapezoid**

3)



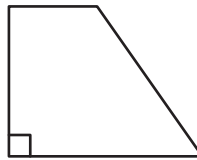
**right trapezoid**

4)



**isosceles trapezoid**

5)



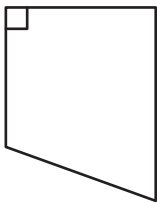
**right trapezoid**

6)



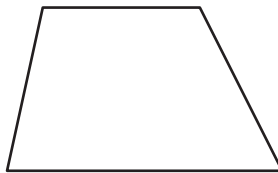
**scalene trapezoid**

7)




**right trapezoid**

8)



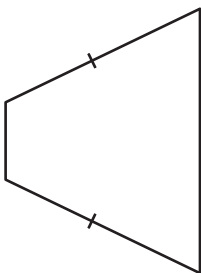
**scalene trapezoid**

9)



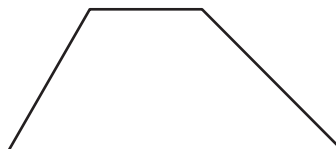
**isosceles trapezoid**

10)



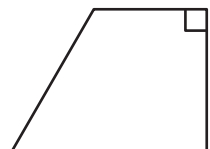
**isosceles trapezoid**

11)



**scalene trapezoid**

12)



**right trapezoid**