

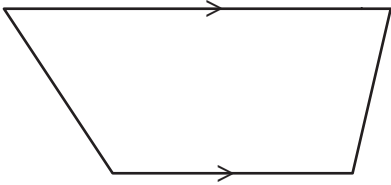
Name : _____

Trapezoids

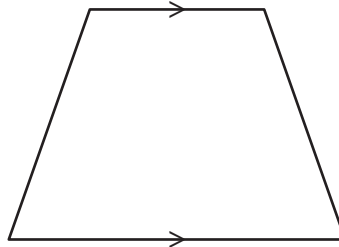
Sheet 2

State whether each quadrilateral is a trapezoid.

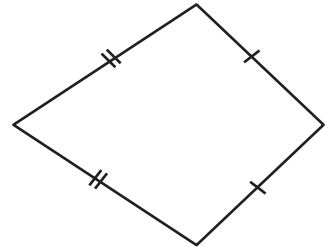
1)



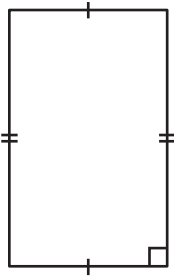
2)



3)



4)

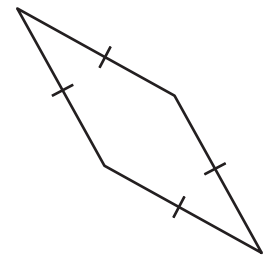


PREVIEW
Gain complete access to the largest collection of worksheets in all subjects!

Members, please log in to download this worksheet.

Not a member? Please sign up to gain complete access.

www.mathworksheets4kids.com



7)

