

Ratio: Part to Whole


Level 2: S2

1)




The ratio of rings to jewelery _____

2)



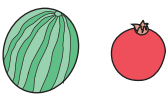
The ratio of _____

3)




The ratio of _____

4)



The ratio of _____

5)



The ratio of birds to parrots _____

PREVIEW

Access the largest collection of
worksheets for just **\$19.95** per year!

Members, please
log in to
download this
worksheet.

Log in

Not a member?
Please sign up to
gain complete
access.

Sign up

www.mathworksheets4kids.com

Ratio: Part to Whole

Level 2: S2


1)



The ratio of rings to jewelry

3 : 7


2)



The ratio of

PREVIEW**8 or 1 : 2**

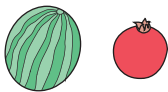
3)



The ratio of

Access the largest collection of
worksheets for just **\$19.95** per year!Members, please
log in to
download this
worksheet.**Log in**Not a member?
Please sign up to
gain complete
access.**Sign up****4 : 9**

4)



The ratio of

www.mathworksheets4kids.com**7 : 2**

5)



The ratio of birds to parrots

6 : 2 or 3 : 1