






Aquarium Fish

The data represented in the pictogram below displays a variety of aquarium fish sold in one month. Read the data and answer the questions that follow:

Goldfish	Angelfish	Regal Tangs	Clownfish	Starfish
				
880				672

- 1) Find the ratio of _____ of goldfish sold.

- 2) Which two varieties of fish were sold in a ratio of 2 : 1?

- 3) Compare the ratio of _____ of goldfish that was sold.

- 4) What is the ratio of the least number of aquarium fish sold to the highest number of aquarium fish sold? Identify the varieties.

- 5) Find the ratio of clownfish sold to all the other varieties of aquarium fish that were sold.

PREVIEW

Gain complete access to the largest
collection of worksheets in all subjects!






Members, please
log in to
download this
worksheet.

Not a member?
Please sign up to
gain complete
access.

www.mathworksheets4kids.com

Aquarium Fish

The data represented in the pictogram below displays a variety of aquarium fish sold in one month. Read the data and answer the questions that follow:

Goldfish	Angelfish	Regal Tangs	Clownfish	Starfish
				
880				672

- 1) Find the ratio of _____ of goldfish sold.

- 2) Which two varieties of fish were sold in a ratio of 2 : 1?

- 3) Compare the ratio of _____ of goldfish that was sold.

- 4) What is the ratio of the least number of aquarium fish sold to the highest number of aquarium fish sold? Identify the varieties.

126 : 880 or 63 : 440 ; Angelfish and Goldfish

- 5) Find the ratio of clownfish sold to all the other varieties of aquarium fish that were sold.

252 : 2011

PREVIEW

Gain complete access to the largest collection of worksheets in all subjects!

Members, please
log in to
download this
worksheet.

Not a member?
Please sign up to
gain complete
access.

www.mathworksheets4kids.com