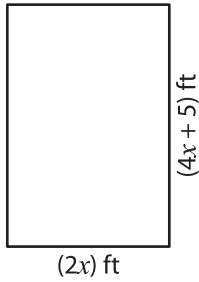



**Solving Equations - Rectangles**

1) Perimeter = 46 ft



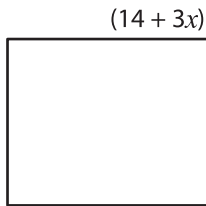
$x =$  \_\_\_\_\_  
 length = \_\_\_\_\_  
 width = \_\_\_\_\_

2) Perimeter = 20 in



$x =$  \_\_\_\_\_  
 length = \_\_\_\_\_

3) Perimeter = 168 yd



$x =$  \_\_\_\_\_  
 length = \_\_\_\_\_  
 width = \_\_\_\_\_

ft  
 + 10x) ft



\_\_\_\_\_

5) Perimeter = 36 in



$x =$  \_\_\_\_\_  
 length = \_\_\_\_\_  
 width = \_\_\_\_\_

0 yd



$x =$  \_\_\_\_\_  
 length = \_\_\_\_\_  
 width = \_\_\_\_\_

**PREVIEW**

Gain complete access to the largest collection of worksheets in all subjects!

Members, please log in to download this worksheet.

Not a member? Please sign up to gain complete access.

[www.mathworksheets4kids.com](http://www.mathworksheets4kids.com)