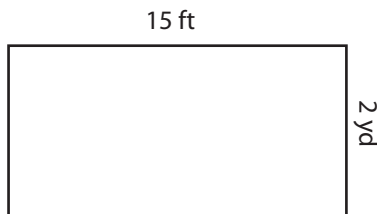


Rectangle-Area

CS1


Find the area of each rectangle.

1)

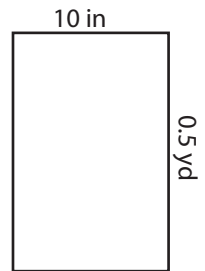


Area = _____


2)

Area = _____ in²

3)



4)



Area = _____

Access the largest collection of
worksheets for just **\$19.95** per year!

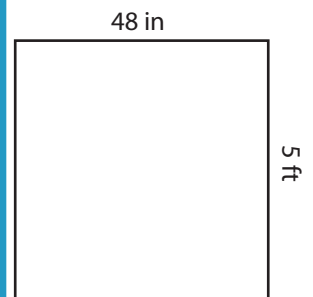
Members, please
log in to
download this
worksheet.

Log in


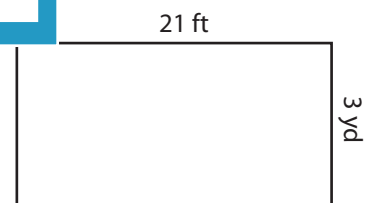
Not a member?
Please sign up to
gain complete
access.

Sign up

www.mathworksheets4kids.com

Area = _____ ft²

7)

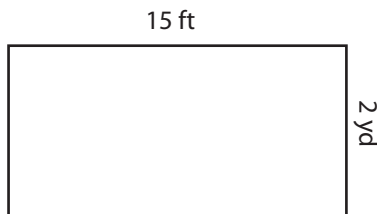
Area = _____ ft²Area = _____ in²Area = _____ yd²

Answer key**Rectangle-Area**

CS1


Find the area of each rectangle.

1)



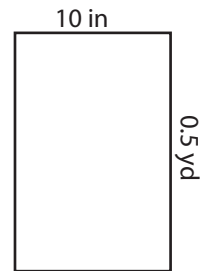
Area = 10

2)




Area = 180 in²

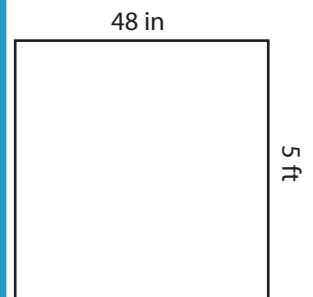
3)



4)

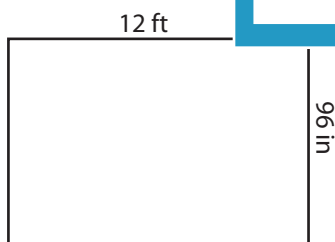


Area = 1560




Area = 20 ft²

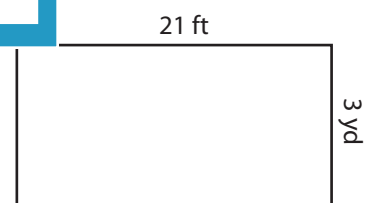
7)



Area = 96 ft²



Area = 63 in²



Area = 21 yd²

PREVIEW

Access the largest collection of
worksheets for just **\$19.95** per year!

Members, please
log in to
download this
worksheet.

Log in

Not a member?
Please sign up to
gain complete
access.

Sign up

www.mathworksheets4kids.com