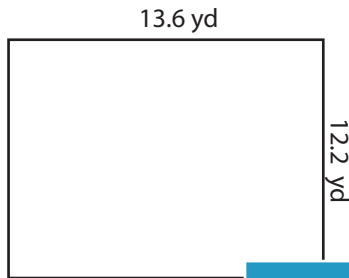


Rectangle-Area

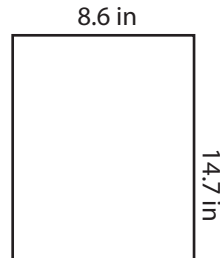
DS1

Find the area of each rectangle.

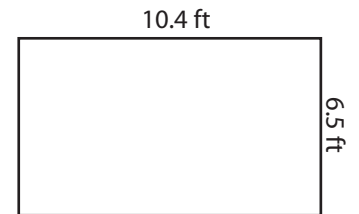
1)

Area =

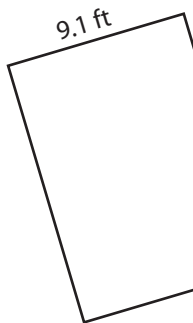
2)

Area =

3)



4)

Area =

Access the largest collection of
worksheets for just **\$19.95** per year!

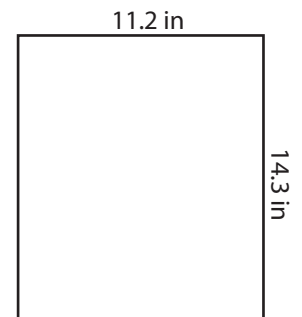
Members, please
log in to
download this
worksheet.

Log in

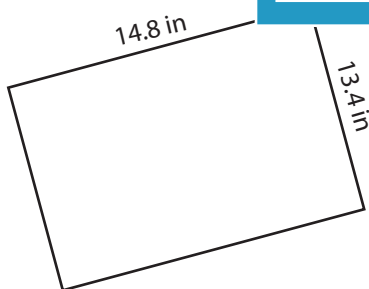

Not a member?
Please sign up to
gain complete
access.

Sign up

www.mathworksheets4kids.com

Area =

7)

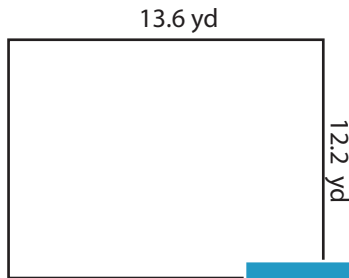
Area = Area = Area =

Answer key**Rectangle-Area**

DS1

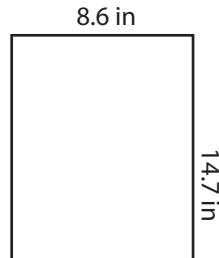
Find the area of each rectangle.

1)



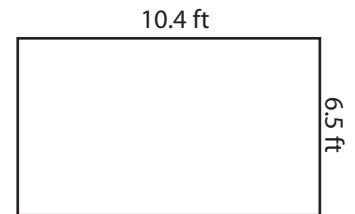
Area = **165.92 yd²**

2)

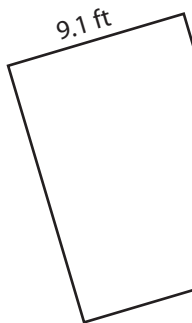


Area = **67.6 ft²**

3)



4)



Area = **110.11 ft²**

Access the largest collection of
worksheets for just **\$19.95** per year!

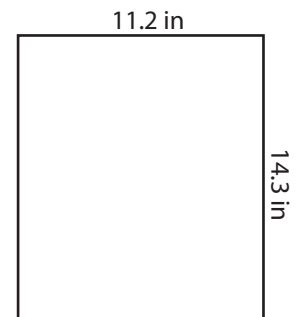
Members, please
log in to
download this
worksheet.

Log in

Not a member?
Please sign up to
gain complete
access.

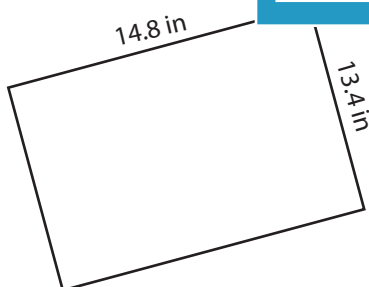
Sign up

www.mathworksheets4kids.com

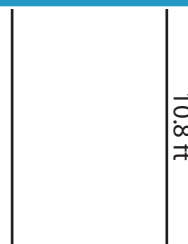


Area = **160.16 in²**


7)



Area = **198.32 in²**



Area = **60.48 ft²**



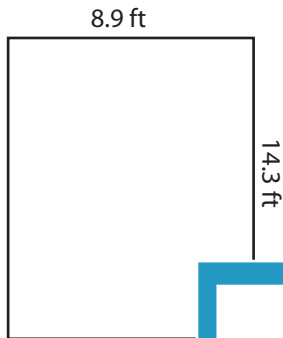
Area = **65.57 yd²**

Rectangle-Area


DS2

Find the area of each rectangle.

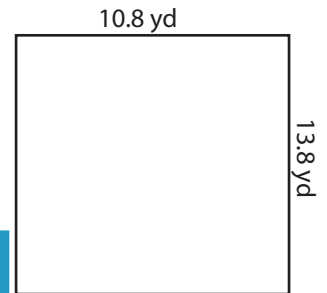
1)

Area =


2)

Area =

3)



4)

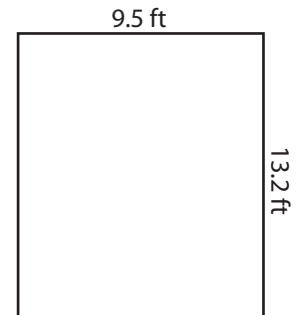
Area =

Access the largest collection of
worksheets for just **\$19.95** per year!


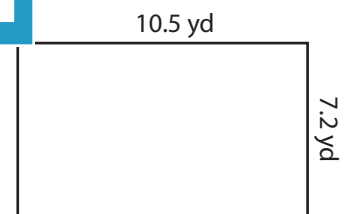
Members, please
log in to
download this
worksheet.

Log in

Not a member?
Please sign up to
gain complete
access.

Sign upwww.mathworksheets4kids.comArea =

7)

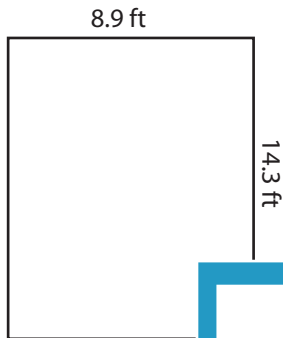
Area = Area = Area =

Answer key**Rectangle-Area**

DS2


Find the area of each rectangle.

1)



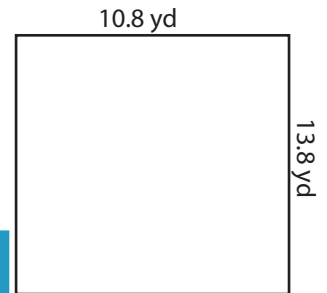
Area = **127.27**

2)

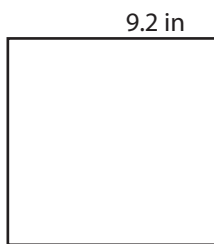


Area = **149.04 yd²**

3)



4)



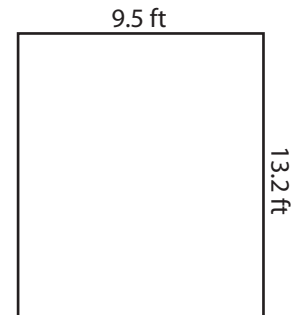
Area = **74.52 in²**

Access the largest collection of
worksheets for just **\$19.95** per year!

Members, please
log in to
download this
worksheet.

Log in

Not a member?
Please sign up to
gain complete
access.

Sign upwww.mathworksheets4kids.com

Area = **125.4 ft²**

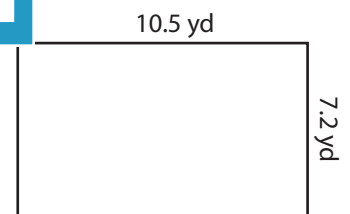
7)



Area = **114.75 in²**



Area = **52.52 ft²**



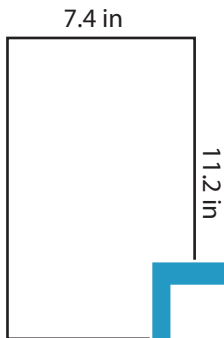
Area = **75.6 yd²**

Rectangle-Area

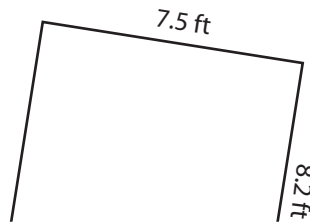
DS3

Find the area of each rectangle.

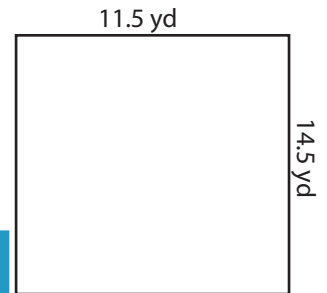
1)

Area =


2)

Area =

3)

Area =

4)

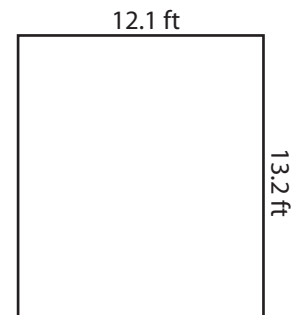
Area =

Access the largest collection of
worksheets for just **\$19.95** per year!

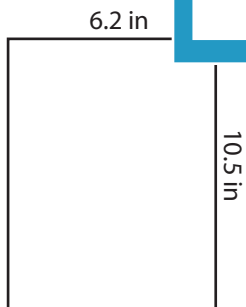

Members, please
log in to
download this
worksheet.

Log in

Not a member?
Please sign up to
gain complete
access.

Sign upwww.mathworksheets4kids.comArea =

7)

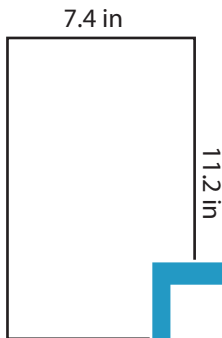
Area = Area = Area =

Answer key**Rectangle-Area**

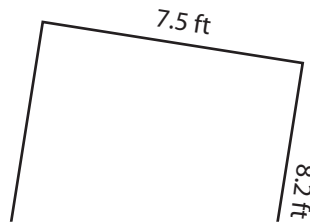
DS3

Find the area of each rectangle.

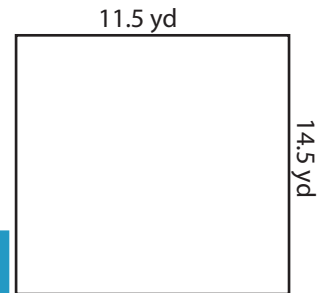
1)

Area = **82.88 in²**


2)

Area = **166.75 yd²**

3)



4)

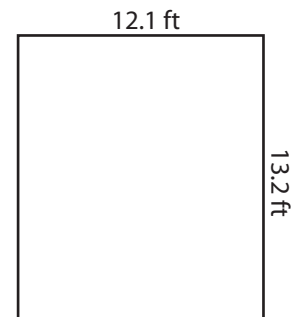
Area = **83.3 yd²**

Access the largest collection of
worksheets for just **\$19.95** per year!



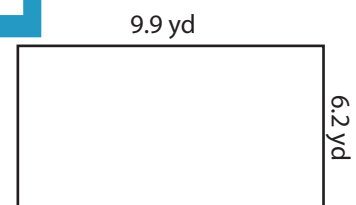
Members, please
log in to
download this
worksheet.

Log in

Not a member?
Please sign up to
gain complete
access.

Sign upwww.mathworksheets4kids.comArea = **159.72 ft²**

7)

Area = **65.1 in²**Area = **36.54 ft²**Area = **61.38 yd²**