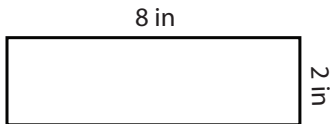


Rectangle - Area & Perimeter

ES2

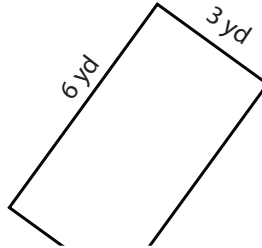
Find the area and perimeter of each rectangle.

1)



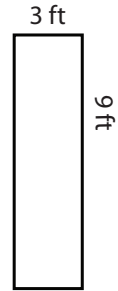
Area : _____
Perimeter : _____

2)

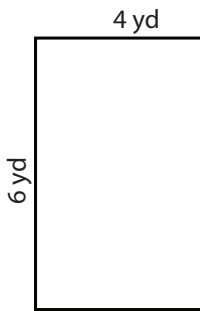


Area : _____
Perimeter : _____

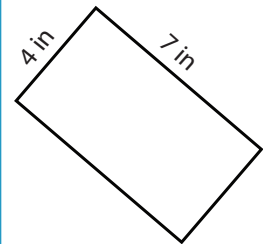
3)



4)

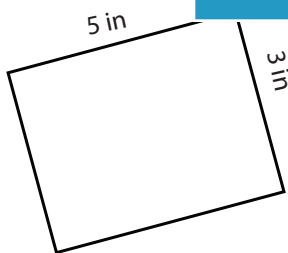


Area : _____
Perimeter : _____

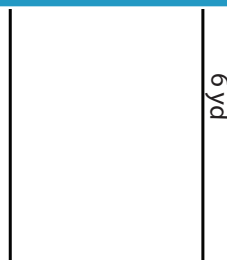


Area : _____
Perimeter : _____

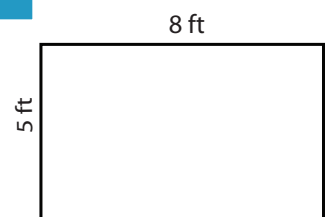
7)



Area : _____
Perimeter : _____



Area : _____
Perimeter : _____



Area : _____
Perimeter : _____

PREVIEW

Access the largest collection of
worksheets for just **\$19.95** per year!

Members, please
log in to
download this
worksheet.

Log in

Not a member?
Please sign up to
gain complete
access.

Sign up

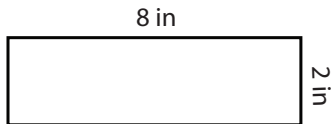
www.mathworksheets4kids.com

Answer key**Rectangle - Area & Perimeter**

ES2

Find the area and perimeter of each rectangle.

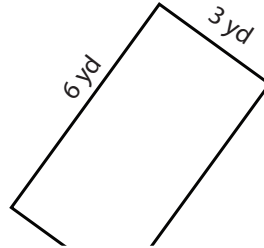
1)



Area : 16 in²

Perimeter : 20 in

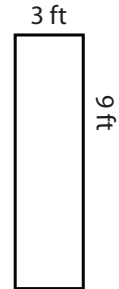
2)



Area : 12 yd²

Perimeter : 16 yd

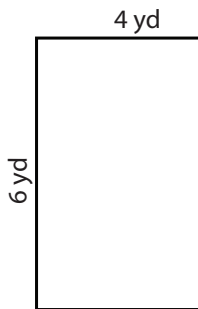
3)



Area : 27 ft²

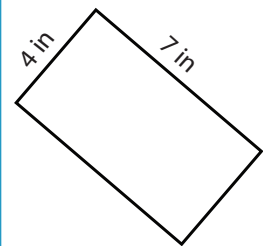
Perimeter : 24 ft

4)



Area : 24 yd²

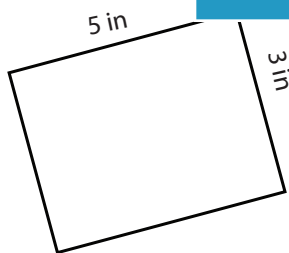
Perimeter : 20 yd



Area : 28 in²

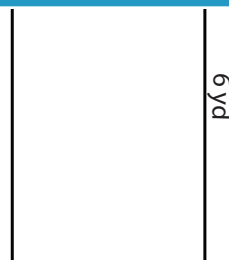
Perimeter : 22 in

7)



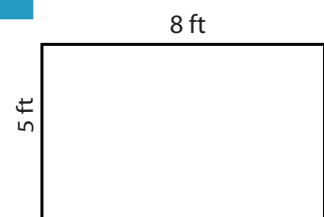
Area : 15 in²

Perimeter : 16 in



Area : 12 yd²

Perimeter : 16 yd



Area : 40 ft²

Perimeter : 26 ft

PREVIEW

Access the largest collection of
worksheets for just **\$19.95** per year!

Members, please
log in to
download this
worksheet.

Log in

Not a member?
Please sign up to
gain complete
access.

Sign up

www.mathworksheets4kids.com