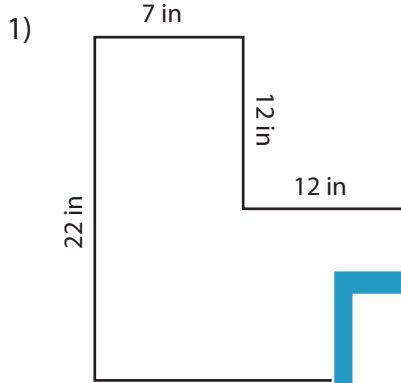
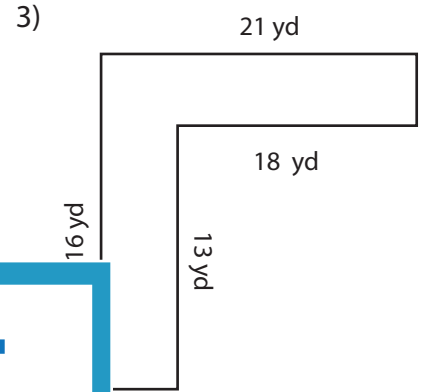
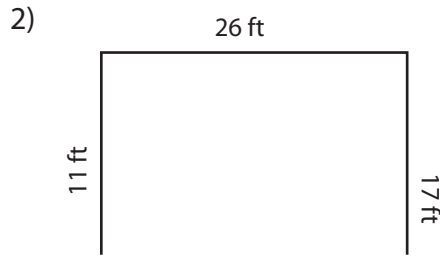


Area and Perimeter of L Shapes

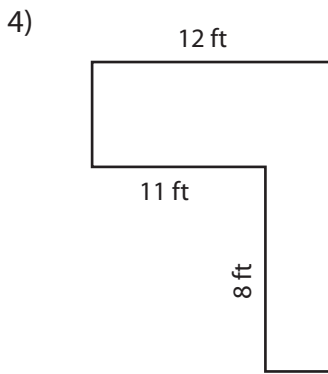
Find the area and perimeter of each shape.



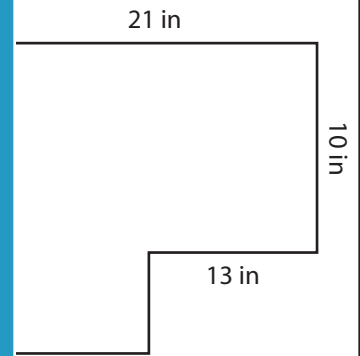
Area: _____
Perimeter: _____



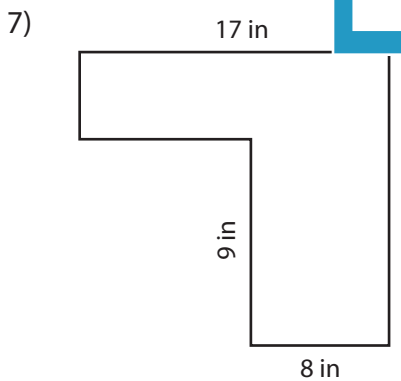
Area: _____
Perimeter: _____



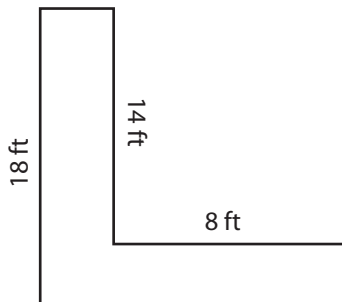
Area: _____
Perimeter: _____



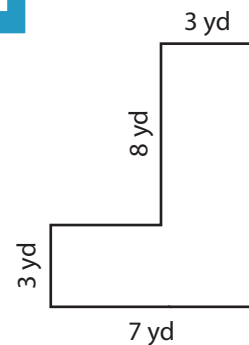
Area: _____
Perimeter: _____



Area: _____
Perimeter: _____



Area: _____
Perimeter: _____



Area: _____
Perimeter: _____

PREVIEW

Access the largest collection of
worksheets for just **\$19.95** per year!

Members, please
log in to
download this
worksheet.

Log in

Not a member?
Please sign up to
gain complete
access.

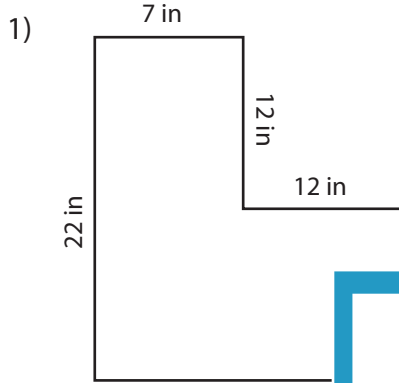
Sign up

www.mathworksheets4kids.com

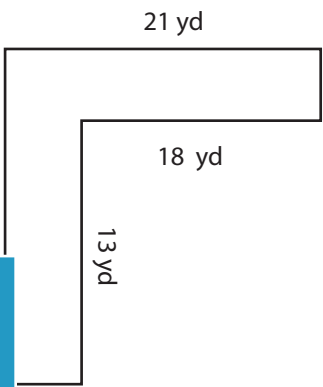
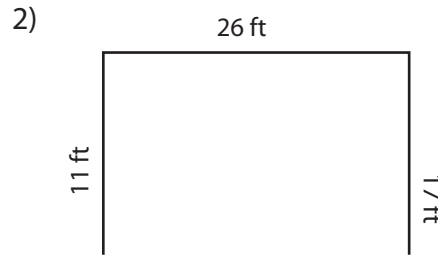
Area and Perimeter of L Shapes

Sheet 2

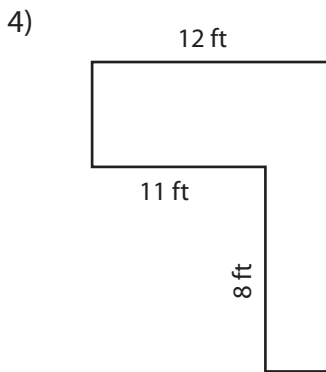
Find the area and perimeter of each shape.



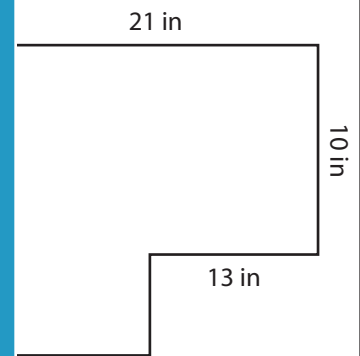
Area: 274 in²
 Perimeter: 82 in



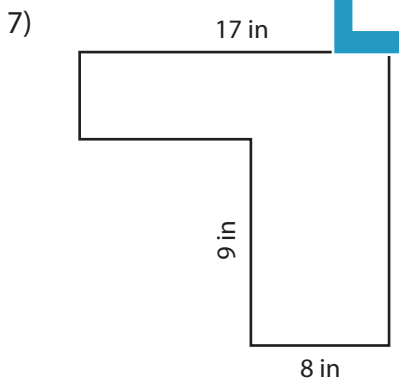
Area: 102 yd²
 Perimeter: 74 yd



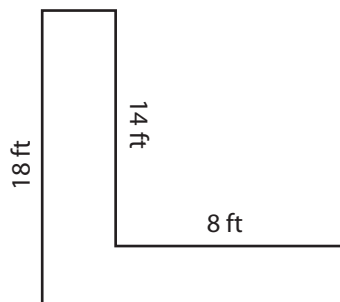
Area: 92 ft²
 Perimeter: 54 ft



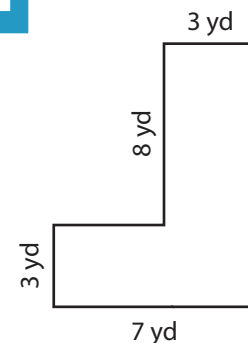
Area: 242 in²
 Perimeter: 70 in



Area: 123 in²
 Perimeter: 58 in



Area: 68 ft²
 Perimeter: 56 ft



Area: 45 yd²
 Perimeter: 36 yd

PREVIEW

Access the largest collection of
 worksheets for just **\$19.95** per year!

Members, please
log in to
download this
worksheet.

Log in

Not a member?
Please sign up to
gain complete
access.

Sign up

www.mathworksheets4kids.com