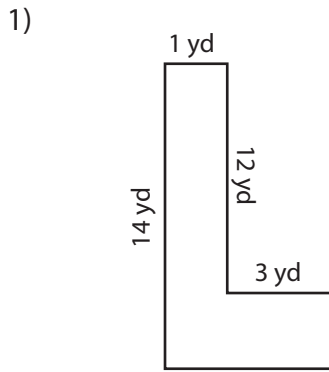
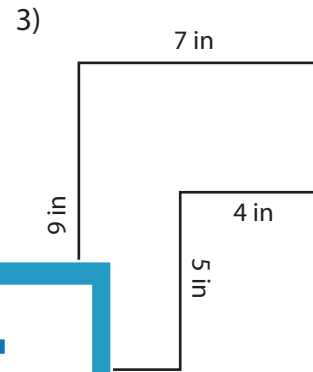
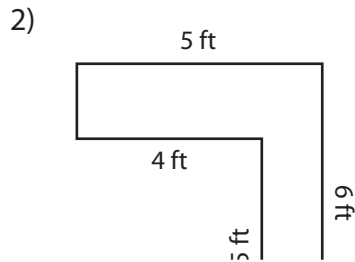


Area and Perimeter of L Shapes

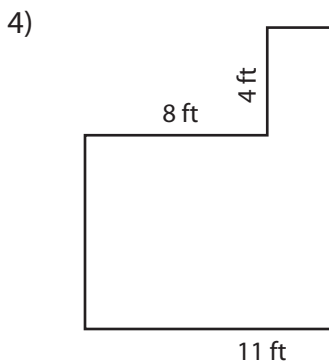
Find the area and perimeter of each shape.



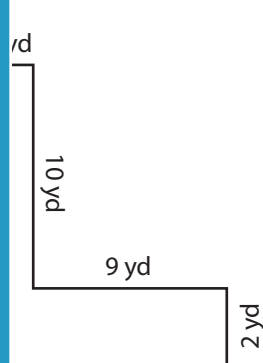
Area: _____
Perimeter: _____



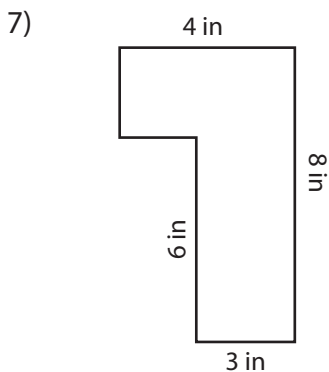
Area: _____
Perimeter: _____



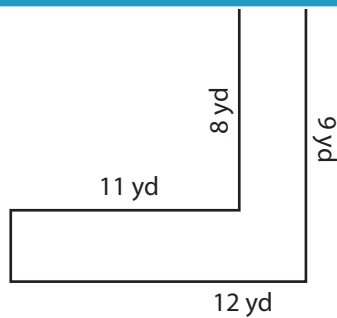
Area: _____
Perimeter: _____



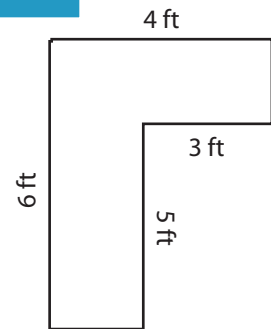
Area: _____
Perimeter: _____



Area: _____
Perimeter: _____



Area: _____
Perimeter: _____



Area: _____
Perimeter: _____

PREVIEW

Access the largest collection of
worksheets for just **\$19.95** per year!

Members, please
log in to
download this
worksheet.

Log in

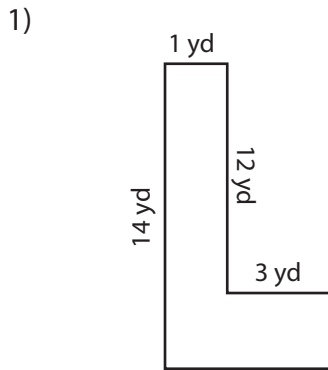
Not a member?
Please sign up to
gain complete
access.

Sign up

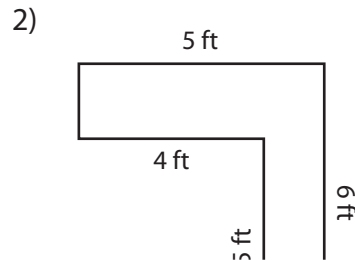
www.mathworksheets4kids.com

Area and Perimeter of L Shapes

Find the area and perimeter of each shape.



Area: 20 yd²
 Perimeter: 36 yd

**PREVIEW**

Access the largest collection of
 worksheets for just **\$19.95** per year!

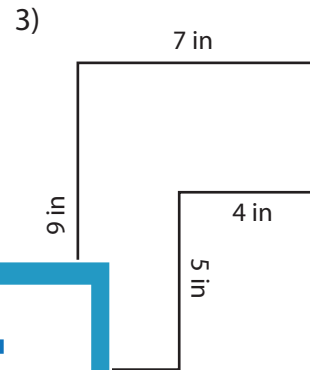
Members, please
 log in to
 download this
 worksheet.

Log in

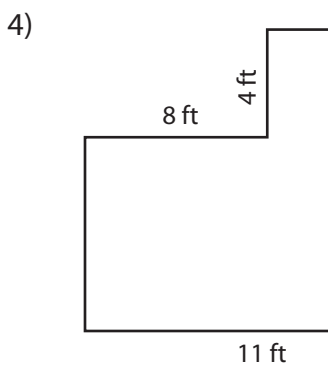
Not a member?
 Please sign up to
 gain complete
 access.

Sign up

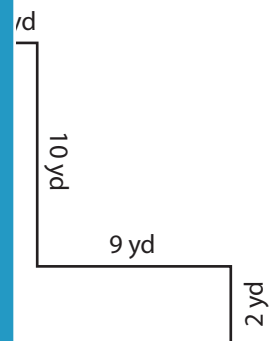
www.mathworksheets4kids.com



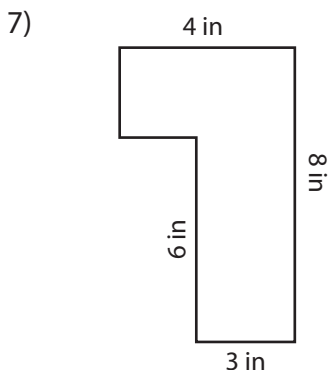
Area: 43 in²
 Perimeter: 32 in



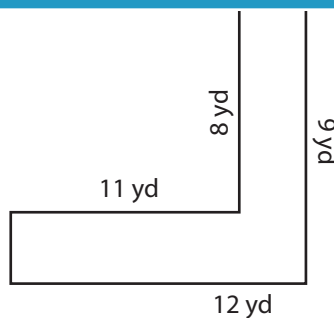
Area: 133 ft²
 Perimeter: 52 ft



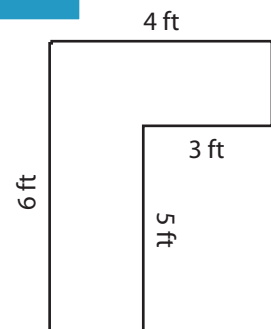
Area: 30 yd²
 Perimeter: 44 yd



Area: 26 in²
 Perimeter: 24 in



Area: 20 yd²
 Perimeter: 42 yd



Area: 9 ft²
 Perimeter: 20 ft