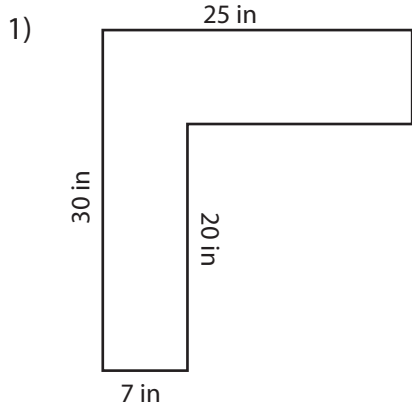
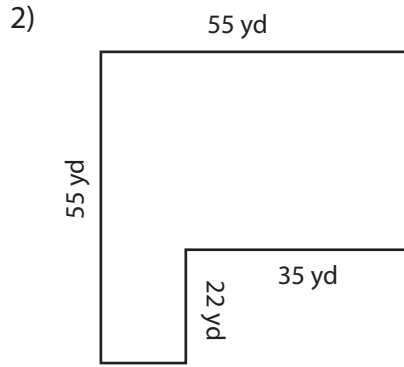


**Area and Perimeter of L Shapes**

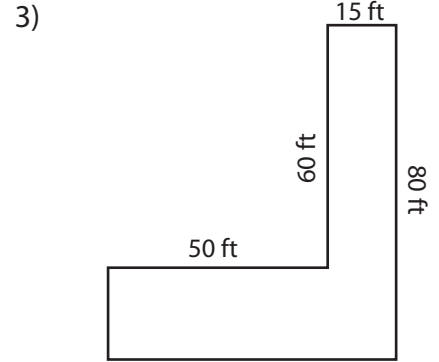
Find the area and perimeter of each shape.



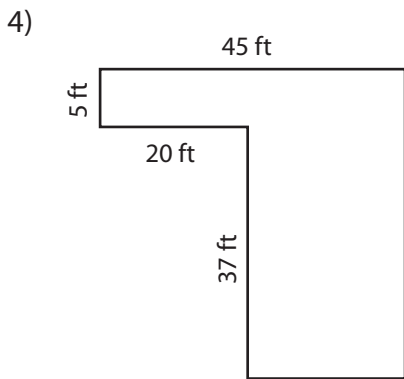
Area: \_\_\_\_\_  
Perimeter: \_\_\_\_\_



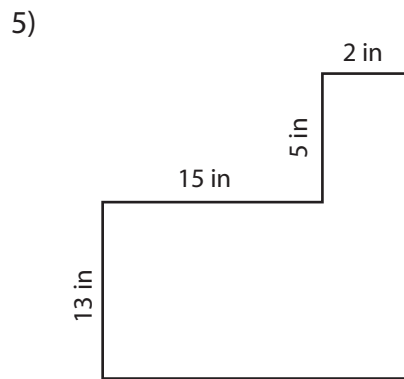
Area: \_\_\_\_\_  
Perimeter: \_\_\_\_\_



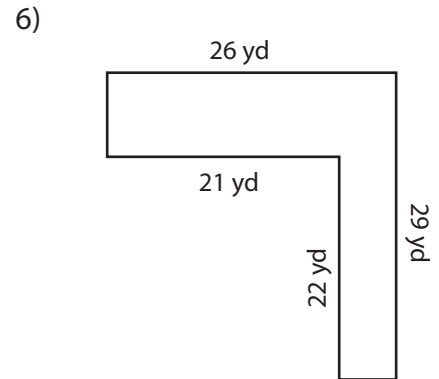
Area: \_\_\_\_\_  
Perimeter: \_\_\_\_\_



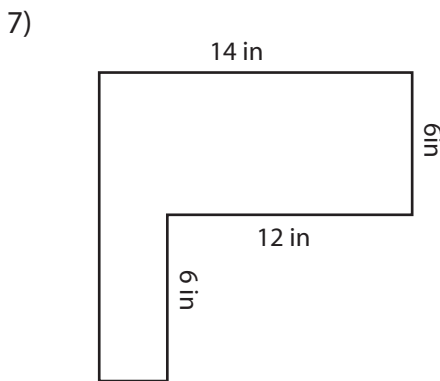
Area: \_\_\_\_\_  
Perimeter: \_\_\_\_\_



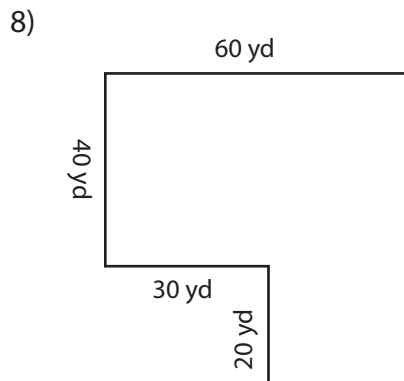
Area: \_\_\_\_\_  
Perimeter: \_\_\_\_\_



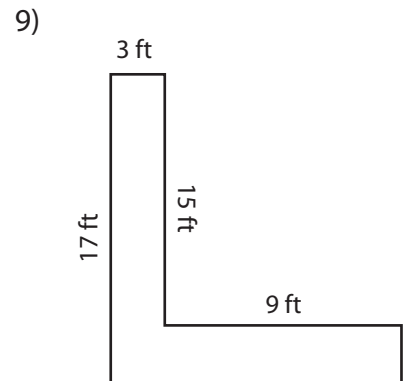
Area: \_\_\_\_\_  
Perimeter: \_\_\_\_\_



Area: \_\_\_\_\_  
Perimeter: \_\_\_\_\_



Area: \_\_\_\_\_  
Perimeter: \_\_\_\_\_

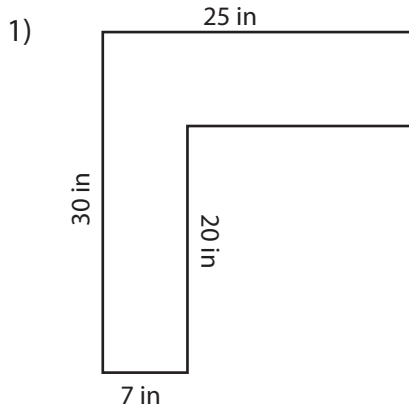


Area: \_\_\_\_\_  
Perimeter: \_\_\_\_\_

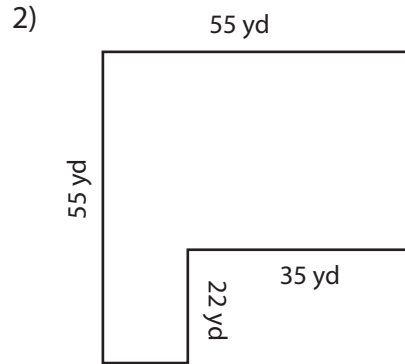
**Area and Perimeter of L Shapes**

Sheet 1

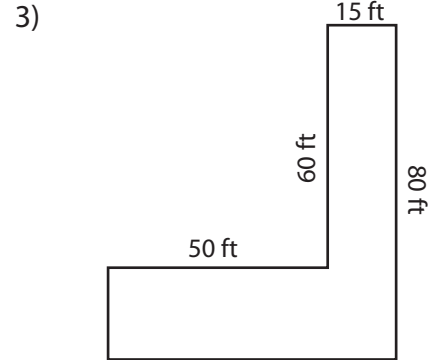
Find the area and perimeter of each shape.



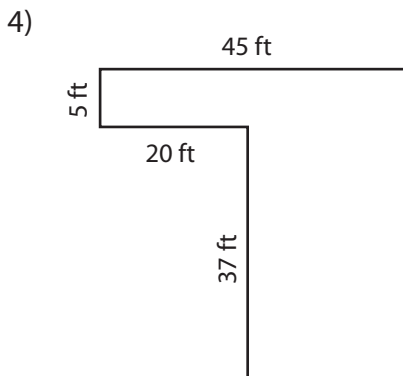
Area: **390 in<sup>2</sup>**  
 Perimeter: **110 in**



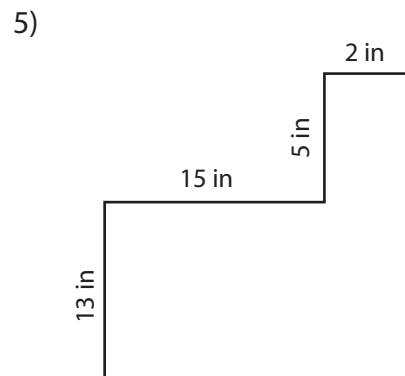
Area: **2255 yd<sup>2</sup>**  
 Perimeter: **220 yd**



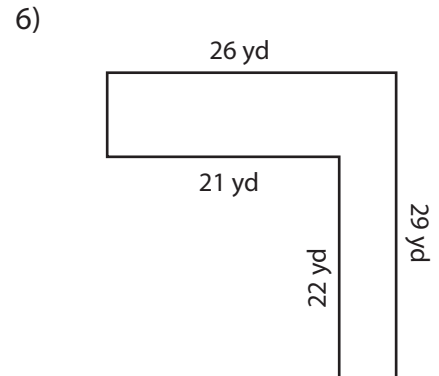
Area: **2200 ft<sup>2</sup>**  
 Perimeter: **290 ft**



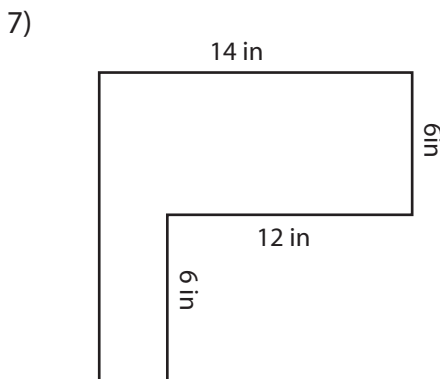
Area: **1150 ft<sup>2</sup>**  
 Perimeter: **174 ft**



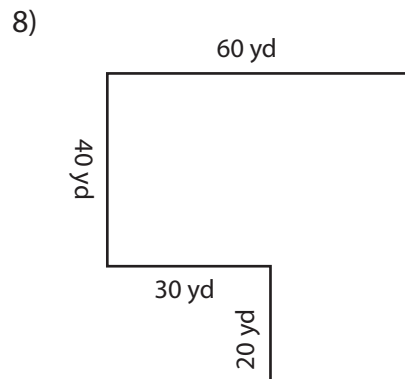
Area: **231 in<sup>2</sup>**  
 Perimeter: **70 in**



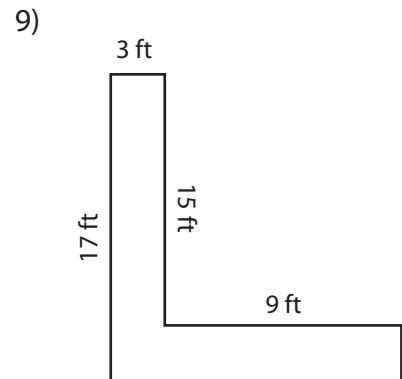
Area: **292 yd<sup>2</sup>**  
 Perimeter: **110 yd**



Area: **96 in<sup>2</sup>**  
 Perimeter: **52 in**



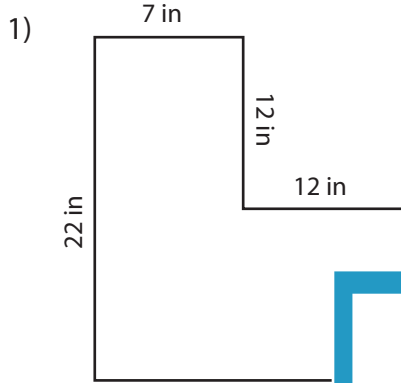
Area: **3000 yd<sup>2</sup>**  
 Perimeter: **240 yd**



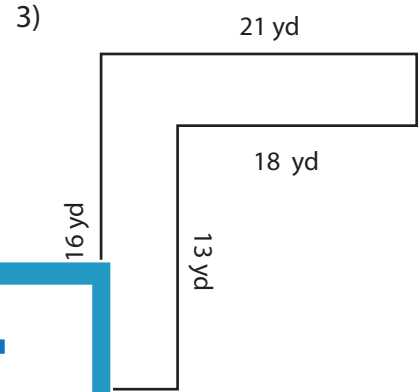
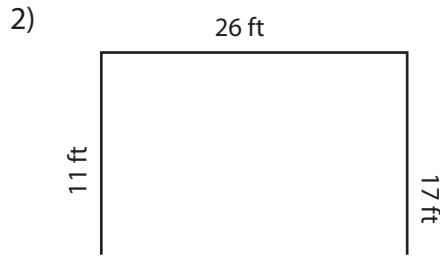
Area: **69 ft<sup>2</sup>**  
 Perimeter: **58 ft**

**Area and Perimeter of L Shapes**

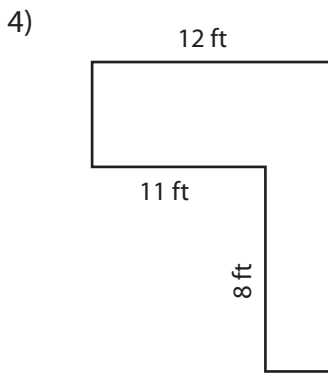
Find the area and perimeter of each shape.



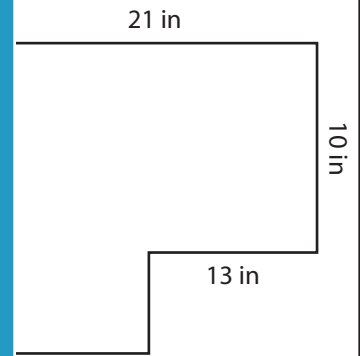
Area: \_\_\_\_\_  
Perimeter: \_\_\_\_\_



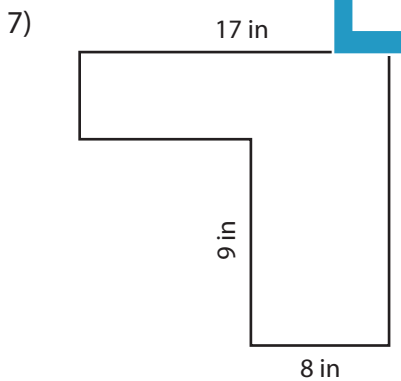
Area: \_\_\_\_\_  
Perimeter: \_\_\_\_\_



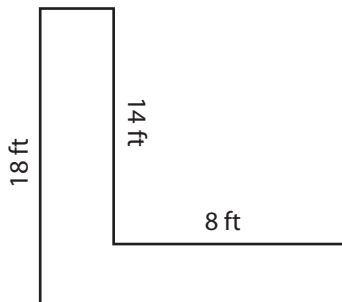
Area: \_\_\_\_\_  
Perimeter: \_\_\_\_\_



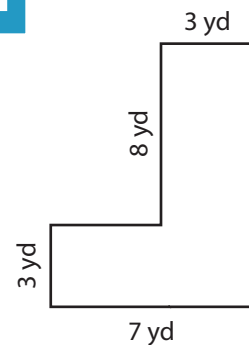
Area: \_\_\_\_\_  
Perimeter: \_\_\_\_\_



Area: \_\_\_\_\_  
Perimeter: \_\_\_\_\_



Area: \_\_\_\_\_  
Perimeter: \_\_\_\_\_



Area: \_\_\_\_\_  
Perimeter: \_\_\_\_\_

# PREVIEW

Access the largest collection of  
worksheets for just **\$19.95** per year!

Members, please  
log in to  
download this  
worksheet.

**Log in**

Not a member?  
Please sign up to  
gain complete  
access.

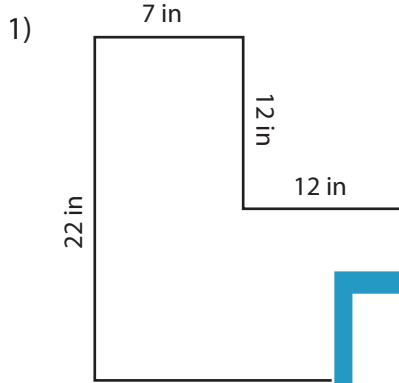
**Sign up**

[www.mathworksheets4kids.com](http://www.mathworksheets4kids.com)

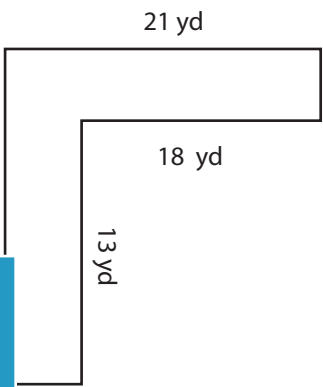
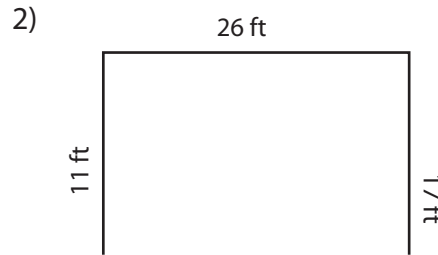
## Area and Perimeter of L Shapes

Sheet 2

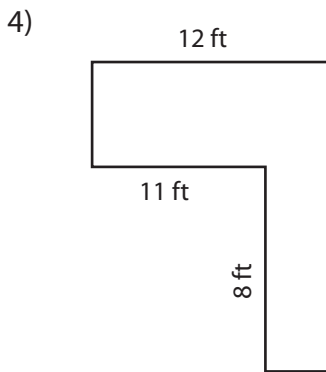
Find the area and perimeter of each shape.



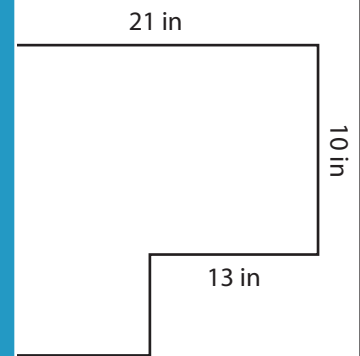
Area: 274 in<sup>2</sup>  
 Perimeter: 82 in



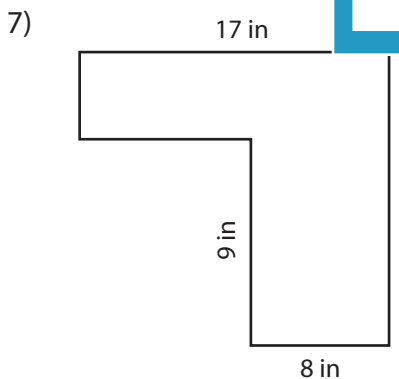
Area: 102 yd<sup>2</sup>  
 Perimeter: 74 yd



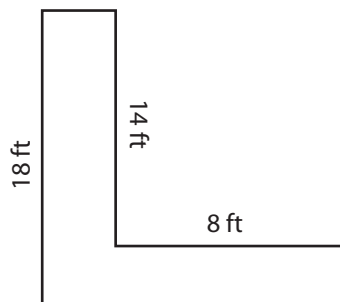
Area: 92 ft<sup>2</sup>  
 Perimeter: 54 ft



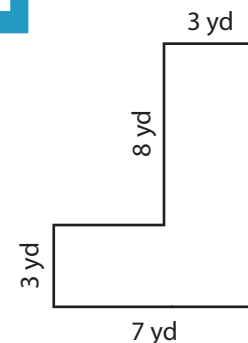
Area: 242 in<sup>2</sup>  
 Perimeter: 70 in



Area: 123 in<sup>2</sup>  
 Perimeter: 58 in



Area: 68 ft<sup>2</sup>  
 Perimeter: 56 ft



Area: 45 yd<sup>2</sup>  
 Perimeter: 36 yd

**PREVIEW**

Access the largest collection of  
 worksheets for just **\$19.95** per year!

Members, please  
log in to  
download this  
worksheet.

Log in

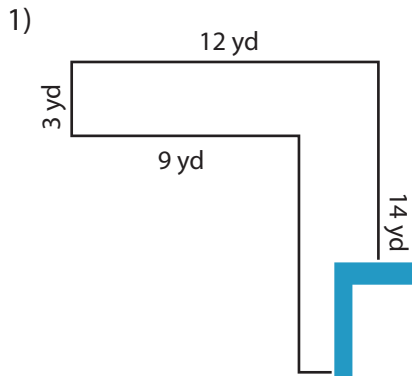
Not a member?  
Please sign up to  
gain complete  
access.

Sign up

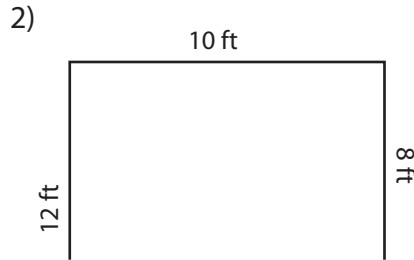
[www.mathworksheets4kids.com](http://www.mathworksheets4kids.com)

**Area and Perimeter of L Shapes**

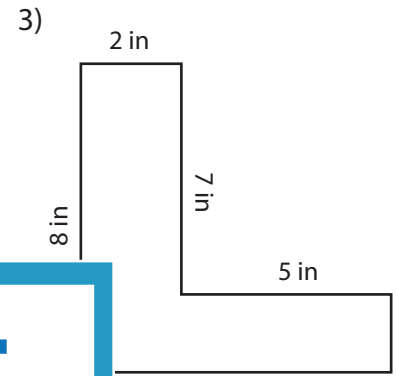
Find the area and perimeter of each shape.



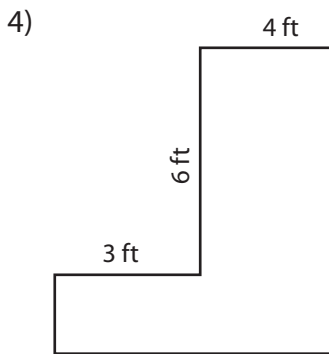
Area: \_\_\_\_\_  
Perimeter: \_\_\_\_\_



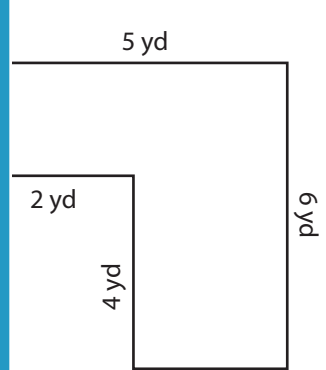
Area: \_\_\_\_\_  
Perimeter: \_\_\_\_\_



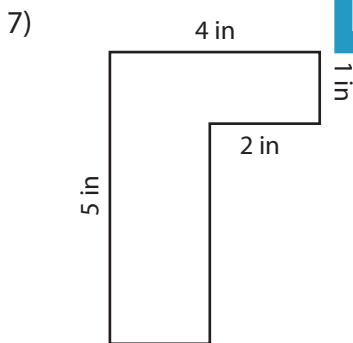
Area: \_\_\_\_\_  
Perimeter: \_\_\_\_\_



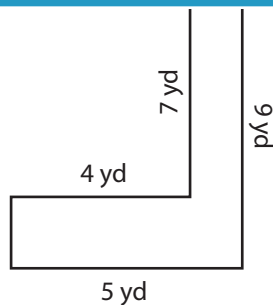
Area: \_\_\_\_\_  
Perimeter: \_\_\_\_\_



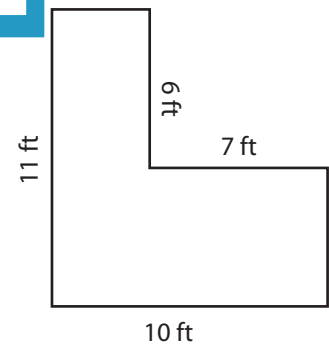
Area: \_\_\_\_\_  
Perimeter: \_\_\_\_\_



Area: \_\_\_\_\_  
Perimeter: \_\_\_\_\_



Area: \_\_\_\_\_  
Perimeter: \_\_\_\_\_



Area: \_\_\_\_\_  
Perimeter: \_\_\_\_\_

# PREVIEW

Access the largest collection of  
worksheets for just **\$19.95** per year!

Members, please  
log in to  
download this  
worksheet.

Log in

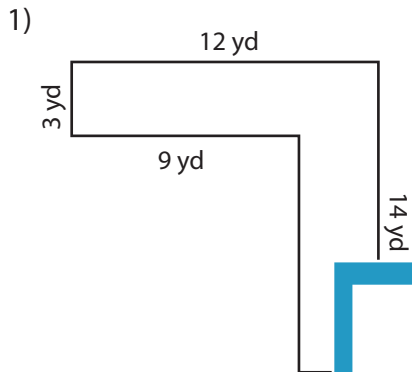
Not a member?  
Please sign up to  
gain complete  
access.

Sign up

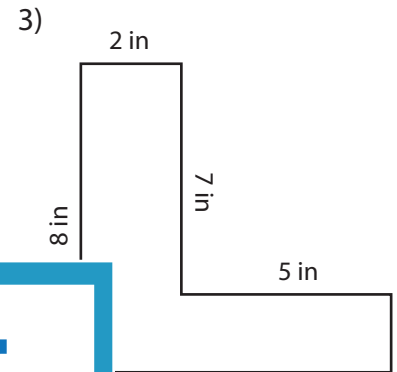
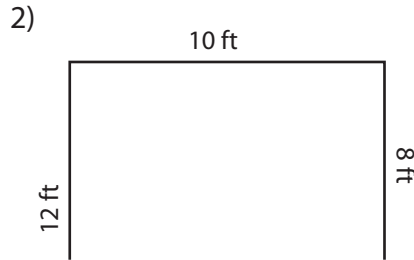
[www.mathworksheets4kids.com](http://www.mathworksheets4kids.com)

**Area and Perimeter of L Shapes**

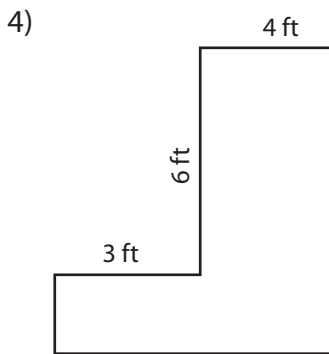
Find the area and perimeter of each shape.



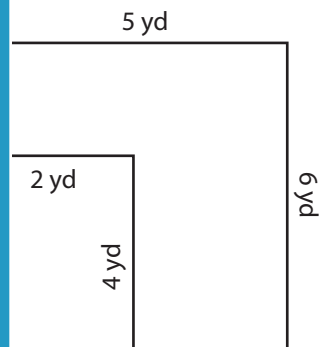
Area: 69 yd<sup>2</sup>  
Perimeter: 52 yd



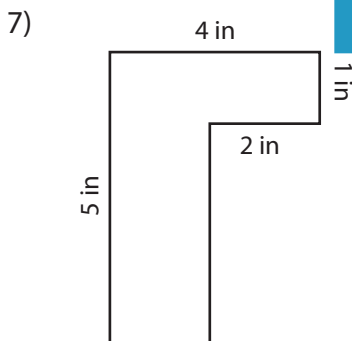
Area: 21 in<sup>2</sup>  
Perimeter: 30 in



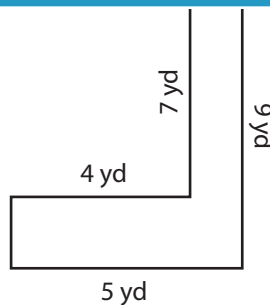
Area: 31 ft<sup>2</sup>  
Perimeter: 28 ft



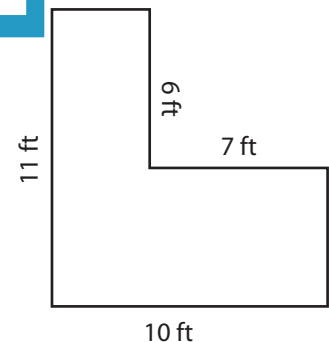
Area: 22 yd<sup>2</sup>  
Perimeter: 22 yd



Area: 12 in<sup>2</sup>  
Perimeter: 18 in



Area: 17 yd<sup>2</sup>  
Perimeter: 28 yd



Area: 68 ft<sup>2</sup>  
Perimeter: 42 ft

**PREVIEW**

Access the largest collection of worksheets for just **\$19.95** per year!

Members, please log in to download this worksheet.

**Log in**

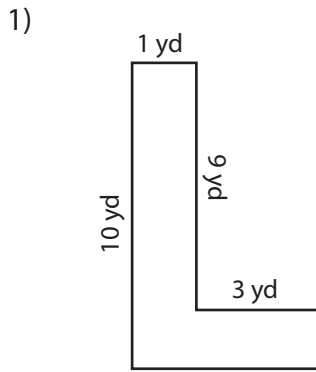
Not a member? Please sign up to gain complete access.

**Sign up**

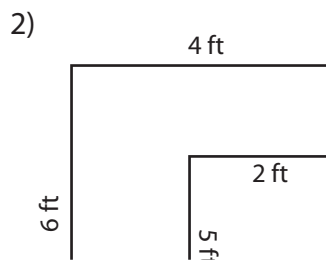
[www.mathworksheets4kids.com](http://www.mathworksheets4kids.com)

**Area and Perimeter of L Shapes**

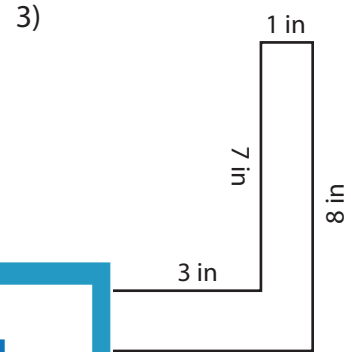
Find the area and perimeter of each shape.



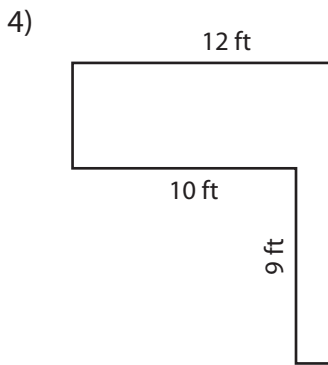
Area: \_\_\_\_\_  
Perimeter: \_\_\_\_\_



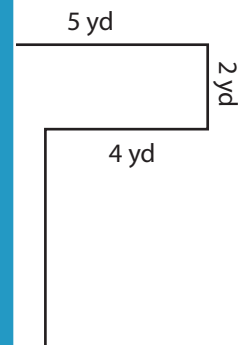
Area: \_\_\_\_\_  
Perimeter: \_\_\_\_\_



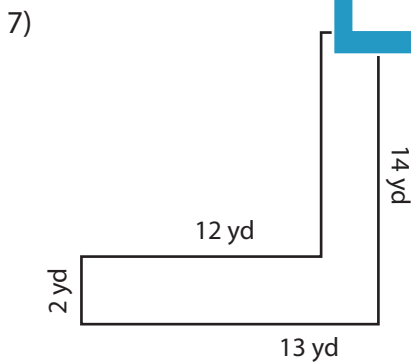
Area: \_\_\_\_\_  
Perimeter: \_\_\_\_\_



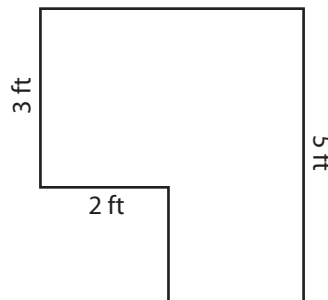
Area: \_\_\_\_\_  
Perimeter: \_\_\_\_\_



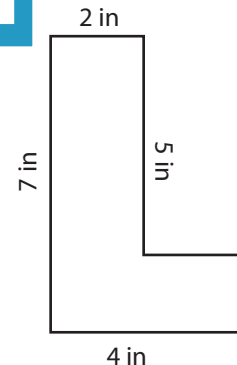
Area: \_\_\_\_\_  
Perimeter: \_\_\_\_\_



Area: \_\_\_\_\_  
Perimeter: \_\_\_\_\_



Area: \_\_\_\_\_  
Perimeter: \_\_\_\_\_



Area: \_\_\_\_\_  
Perimeter: \_\_\_\_\_

**PREVIEW**

Access the largest collection of  
worksheets for just **\$19.95** per year!

Members, please  
log in to  
download this  
worksheet.

**Log in**

Not a member?  
Please sign up to  
gain complete  
access.

**Sign up**

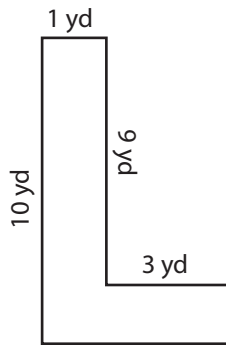
[www.mathworksheets4kids.com](http://www.mathworksheets4kids.com)

**Area and Perimeter of L Shapes**

Sheet 4

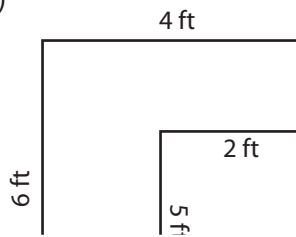
Find the area and perimeter of each shape.

1)



Area: 13 yd<sup>2</sup>  
 Perimeter: 28 yd

2)

**PREVIEW**

Access the largest collection of  
 worksheets for just **\$19.95** per year!

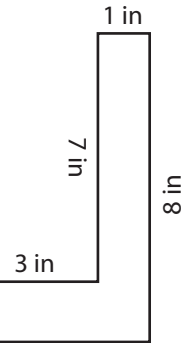
Members, please  
 log in to  
 download this  
 worksheet.

**Log in**

Not a member?  
 Please sign up to  
 gain complete  
 access.

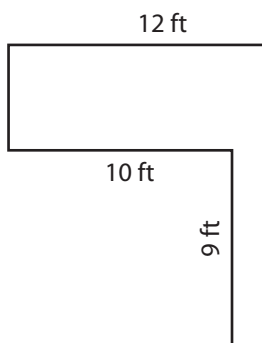
**Sign up**
[www.mathworksheets4kids.com](http://www.mathworksheets4kids.com)

3)

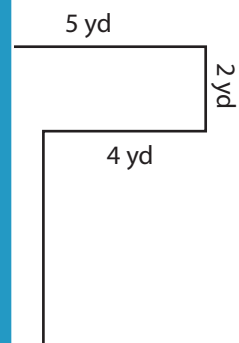


Area: 11 in<sup>2</sup>  
 Perimeter: 24 in

4)

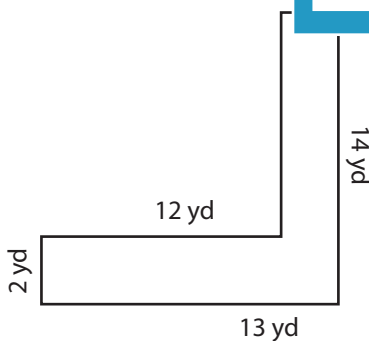


Area: 54 ft<sup>2</sup>  
 Perimeter: 48 ft

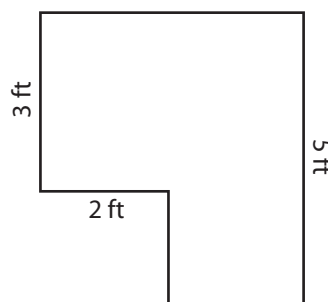


Area: 16 yd<sup>2</sup>  
 Perimeter: 26 yd

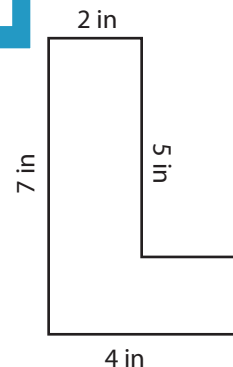
7)



Area: 38 yd<sup>2</sup>  
 Perimeter: 54 yd



Area: 16 ft<sup>2</sup>  
 Perimeter: 18 ft

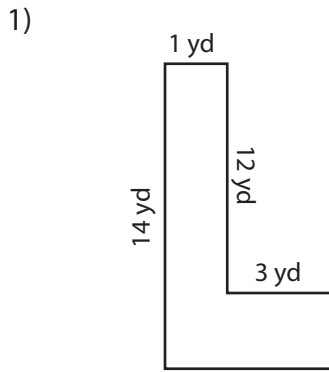


Area: 18 in<sup>2</sup>  
 Perimeter: 22 in

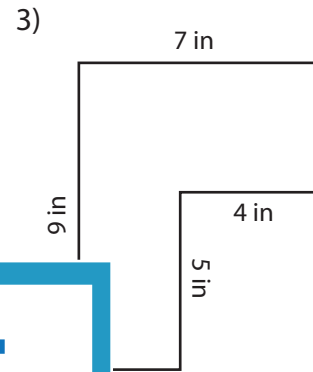
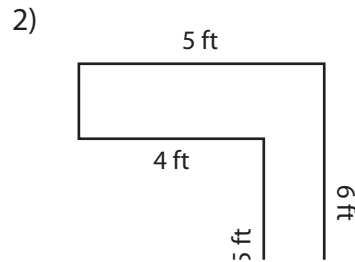


**Area and Perimeter of L Shapes**

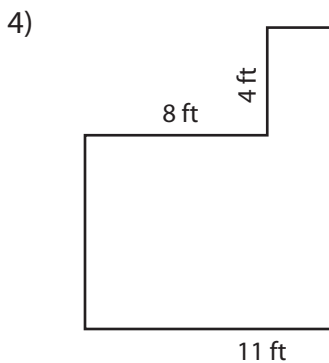
Find the area and perimeter of each shape.



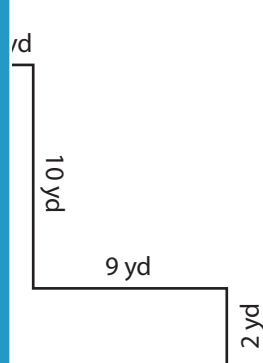
Area: \_\_\_\_\_  
Perimeter: \_\_\_\_\_



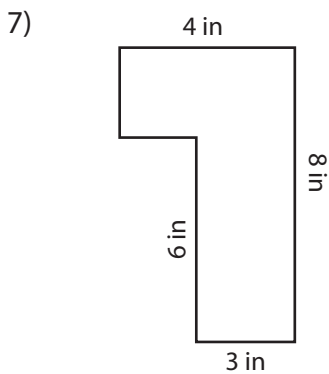
Area: \_\_\_\_\_  
Perimeter: \_\_\_\_\_



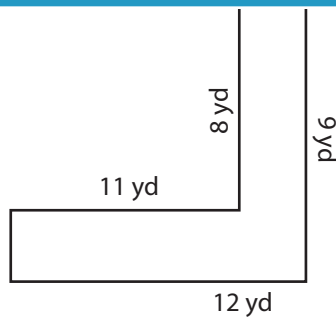
Area: \_\_\_\_\_  
Perimeter: \_\_\_\_\_



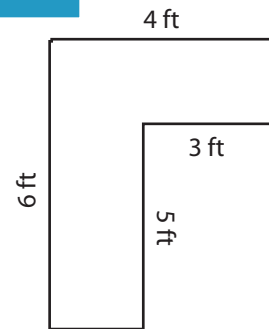
Area: \_\_\_\_\_  
Perimeter: \_\_\_\_\_



Area: \_\_\_\_\_  
Perimeter: \_\_\_\_\_



Area: \_\_\_\_\_  
Perimeter: \_\_\_\_\_



Area: \_\_\_\_\_  
Perimeter: \_\_\_\_\_

# PREVIEW

Access the largest collection of worksheets for just **\$19.95** per year!

Members, please log in to download this worksheet.

Log in

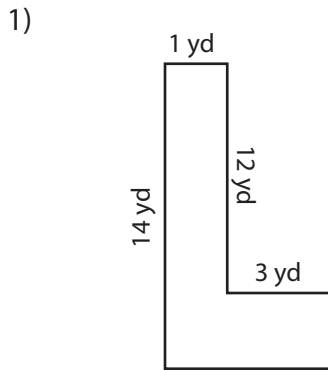
Not a member? Please sign up to gain complete access.

Sign up

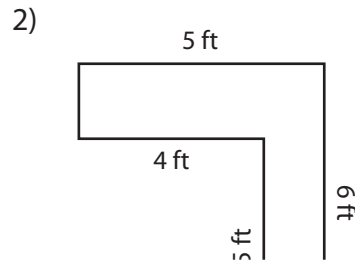
[www.mathworksheets4kids.com](http://www.mathworksheets4kids.com)

**Area and Perimeter of L Shapes**

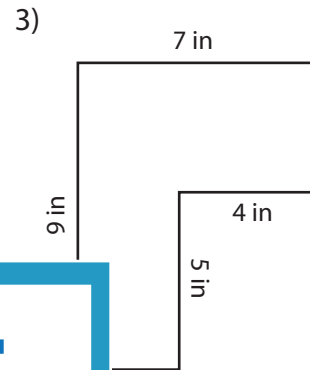
Find the area and perimeter of each shape.



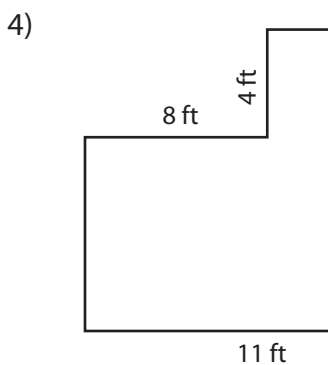
Area: 20 yd<sup>2</sup>  
Perimeter: 36 yd



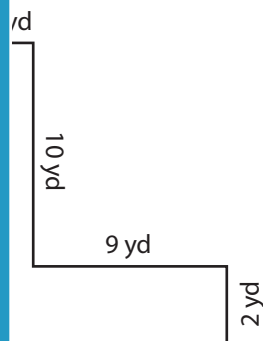
Area: 20 yd<sup>2</sup>  
Perimeter: 42 yd



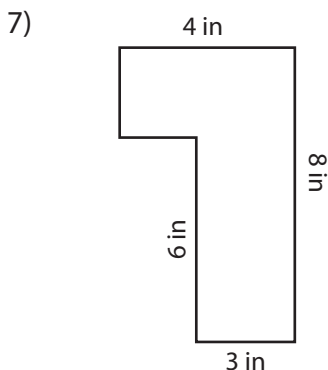
Area: 43 in<sup>2</sup>  
Perimeter: 32 in



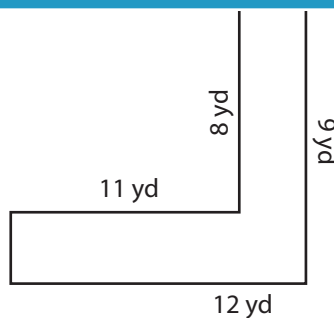
Area: 133 ft<sup>2</sup>  
Perimeter: 52 ft



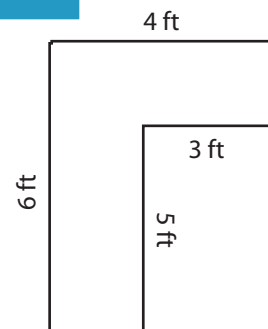
Area: 30 yd<sup>2</sup>  
Perimeter: 44 yd



Area: 26 in<sup>2</sup>  
Perimeter: 24 in



Area: 20 yd<sup>2</sup>  
Perimeter: 42 yd



Area: 9 ft<sup>2</sup>  
Perimeter: 20 ft

**PREVIEW**

Access the largest collection of  
worksheets for just **\$19.95** per year!

Members, please  
log in to  
download this  
worksheet.

**Log in**

Not a member?  
Please sign up to  
gain complete  
access.

**Sign up**

[www.mathworksheets4kids.com](http://www.mathworksheets4kids.com)