


Rectangle - Perimeter

DS3

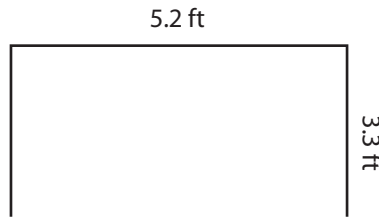
Find the perimeter of each rectangle.

1)



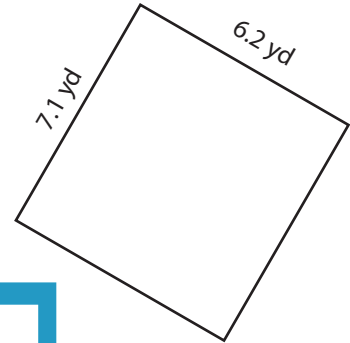
Perimeter =

2)




Perimeter =

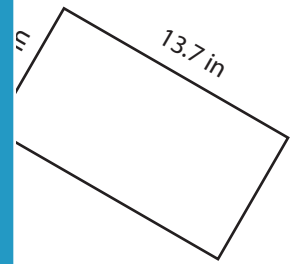
3)



4)

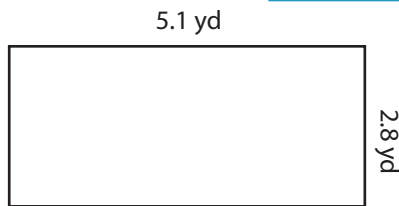


Perimeter =



Perimeter =


7)



Perimeter =



Perimeter =



Perimeter =

PREVIEW

Access the largest collection of worksheets for just **\$19.95** per year!

Members, please log in to download this worksheet.

Log in

Not a member? Please sign up to gain complete access.

Sign up


www.mathworksheets4kids.com

Rectangle - Perimeter

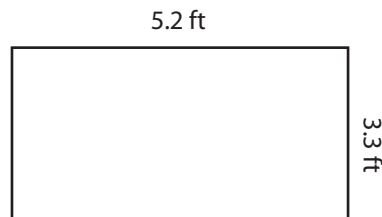
DS3

Find the perimeter of each rectangle.

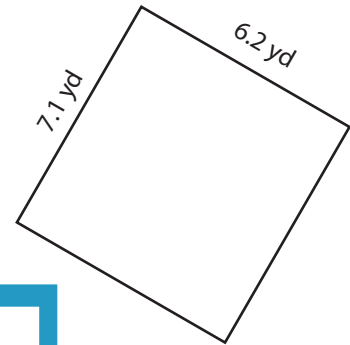
1)

Perimeter = **7.6**


2)

Perimeter = **15.8 yd**

3)

Perimeter = **26.6 yd**

4)

Perimeter = **9.6**

Access the largest collection of
worksheets for just **\$19.95** per year!

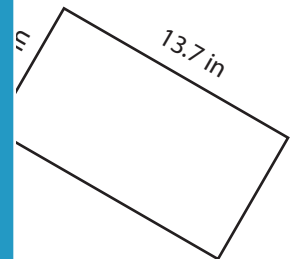
Members, please
log in to
download this
worksheet.

Log in



Not a member?
Please sign up to
gain complete
access.

Sign up

www.mathworksheets4kids.com

Perimeter = **40.6 in**

7)

Perimeter = **15.8 yd**Perimeter = **44.8 in**Perimeter = **52.4 ft**